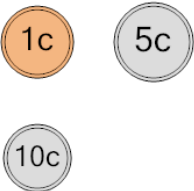




Math worksheet on 'Coin Math - Count Total - Pennies, Nickels, Dimes (Level 1)'. Part of a broader unit on 'Coin Math - Intro'

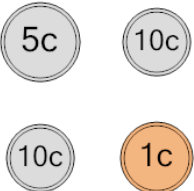
Learn online: app.mobius.academy/math/units/coin_math_intro/

1 What is the total value of these coins?



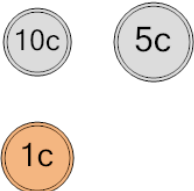
| | |
|----------------------|----------------------|
| a 16 cents | b 26 cents |
| c 17 cents | d 6 cents |
| e 41 cents | |

2 What is the total value of these coins?



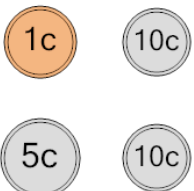
| | |
|----------------------|----------------------|
| a 28 cents | b 27 cents |
| c 26 cents | d 16 cents |
| e 36 cents | f 32 cents |

3 What is the total value of these coins?



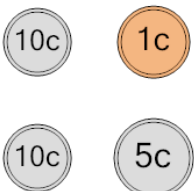
| | |
|----------------------|----------------------|
| a 36 cents | b 46 cents |
| c 6 cents | d 18 cents |
| e 16 cents | f 26 cents |

4 What is the total value of these coins?



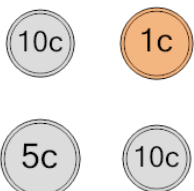
| | |
|----------------------|----------------------|
| a 16 cents | b 52 cents |
| c 26 cents | d 36 cents |
| e 21 cents | f 27 cents |

5 What is the total value of these coins?



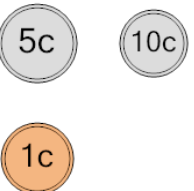
| | |
|----------------------|----------------------|
| a 16 cents | b 76 cents |
| c 25 cents | d 26 cents |
| e 36 cents | |

6 What is the total value of these coins?



| | |
|----------------------|----------------------|
| a 46 cents | b 27 cents |
| c 36 cents | d 26 cents |
| e 28 cents | |

7 What is the total value of these coins?



| | |
|----------------------|----------------------|
| a 6 cents | b 16 cents |
| c 26 cents | d 22 cents |
| e 18 cents | f 15 cents |