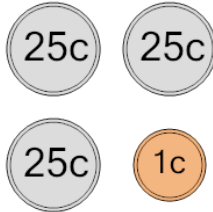




Math worksheet on 'Coin Math - Count Total - Pennies and Quarters (Level 3)'. Part of a broader unit on 'Coin Math - Multiplication Intro'

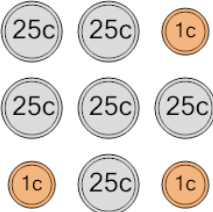
Learn online: app.mobius.academy/math/units/coin_math_multiplication_intro/

1 What is the total value of these coins?




a 77 cents	b 126 cents
c 51 cents	d 86 cents
e 101 cents	f 76 cents

2 What is the total value of these coins?



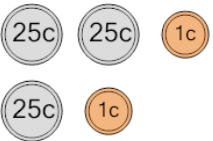
a 203 cents	b 128 cents
c 155 cents	d 153 cents
e 152 cents	f 178 cents

3 What is the total value of these coins?



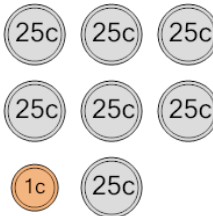
a 51 cents	b 56 cents
c 36 cents	d 76 cents
e 26 cents	

4 What is the total value of these coins?



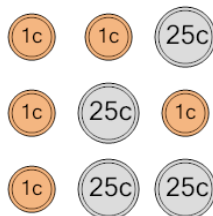
a 52 cents	b 76 cents
c 102 cents	d 79 cents
e 78 cents	f 77 cents

5 What is the total value of these coins?



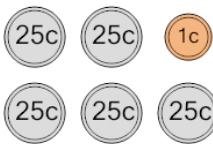
a 201 cents	b 177 cents
c 151 cents	d 211 cents
e 176 cents	f 226 cents

6 What is the total value of these coins?



a 130 cents	b 106 cents
c 104 cents	d 80 cents
e 105 cents	f 155 cents

7 What is the total value of these coins?



a 137 cents	b 151 cents
c 126 cents	d 131 cents
e 127 cents	f 156 cents