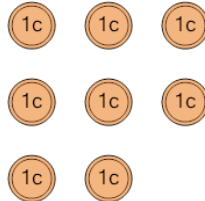




Math worksheet on 'Coin Math - Count Total - Pennies (Level 3)'. Part of a broader unit on 'Coin Math - Practice'

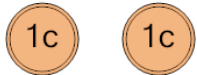
Learn online: app.mobius.academy/math/units/coin_math_practice/

1 What is the total value of these coins?



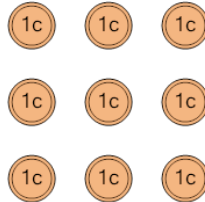
a 8 cents	b 13 cents
c 10 cents	d 9 cents
e 7 cents	

2 What is the total value of these coins?



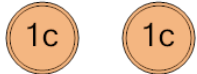
a 12 cents	b 28 cents
c 3 cents	d 4 cents
e 1 cents	f 2 cents

3 What is the total value of these coins?



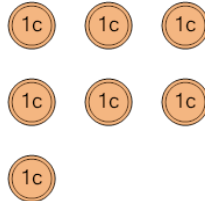
a 11 cents	b 20 cents
c 8 cents	d 9 cents
e 10 cents	f 35 cents

4 What is the total value of these coins?



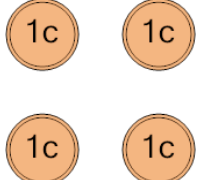
a 3 cents	b 2 cents
c 1 cents	d 4 cents
e 13 cents	f 27 cents

5 What is the total value of these coins?



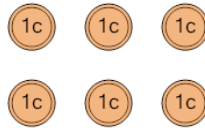
a 17 cents	b 8 cents
c 7 cents	d 6 cents
e 18 cents	

6 What is the total value of these coins?



a 6 cents	b 4 cents
c 24 cents	d 19 cents
e 5 cents	f 30 cents

7 What is the total value of these coins?



a 8 cents	b 7 cents
c 6 cents	d 5 cents