





















Coin Math - Count Total - Quarters



1 What is the total value of these coins? 	A 25 cents	B 75 cents	2 What is the total value of these coins?  	A 50 cents	B 75 cents
	C 45 cents	D 50 cents		C 100 cents	D 80 cents
				E 25 cents	
3 What is the total value of these coins?   	A 76 cents	B 100 cents	4 What is the total value of these coins?  	A 50 cents	B 65 cents
	C 75 cents	D 125 cents		C 60 cents	D 75 cents
	E 110 cents			E 25 cents	
5 What is the total value of these coins?    	A 125 cents	B 75 cents	6 What is the total value of these coins?  	A 80 cents	B 25 cents
	C 100 cents	D 126 cents		C 51 cents	D 100 cents
				E 50 cents	F 75 cents
7 What is the total value of these coins? 	A 50 cents	B 25 cents	8 What is the total value of these coins?  	A 75 cents	B 100 cents
	C 31 cents			C 25 cents	D 50 cents
				E 60 cents	