




Math worksheet on 'Coin Math - Count Total - Quarters (Level 3)'. Part of a broader unit on 'Coin Math - Practice'

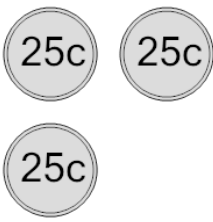
Learn online: [app.mobius.academy/math/units/coin\\_math\\_practice/](http://app.mobius.academy/math/units/coin_math_practice/)

**1** What is the total value of these coins?




<b>a</b> 75 cents	<b>b</b> 35 cents
<b>c</b> 50 cents	<b>d</b> 25 cents
<b>e</b> 60 cents	

**2** What is the total value of these coins?




<b>a</b> 50 cents	<b>b</b> 105 cents
<b>c</b> 125 cents	<b>d</b> 77 cents
<b>e</b> 100 cents	<b>f</b> 75 cents

**3** What is the total value of these coins?




<b>a</b> 255 cents	<b>b</b> 275 cents
<b>c</b> 236 cents	<b>d</b> 250 cents
<b>e</b> 235 cents	<b>f</b> 225 cents

**4** What is the total value of these coins?




<b>a</b> 175 cents	<b>b</b> 150 cents
<b>c</b> 125 cents	<b>d</b> 170 cents
<b>e</b> 156 cents	

**5** What is the total value of these coins?




<b>a</b> 151 cents	<b>b</b> 175 cents
<b>c</b> 125 cents	<b>d</b> 150 cents
<b>e</b> 200 cents	<b>f</b> 160 cents

**6** What is the total value of these coins?



<b>a</b> 50 cents	<b>b</b> 75 cents
<b>c</b> 25 cents	<b>d</b> 40 cents

**7** What is the total value of these coins?



<b>a</b> 200 cents	<b>b</b> 275 cents
<b>c</b> 235 cents	<b>d</b> 251 cents
<b>e</b> 250 cents	<b>f</b> 225 cents