

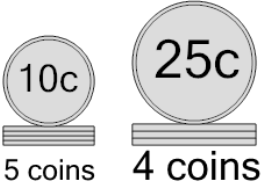


Math worksheet on 'Coin Math - Count Piles - Dimes and Quarters (Level 3)'. Part of a broader unit on 'Multiplication From Counting - Practice'

Learn online:

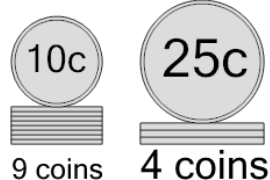
app.mobius.academy/math/units/multiplication_from_counting_practice/

1 What is the total value of these stacks of coins?



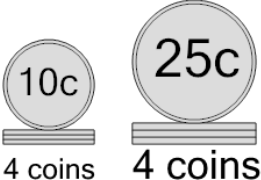
a 160 cents	b 150 cents
c 175 cents	d 140 cents
e 156 cents	f 176 cents

2 What is the total value of these stacks of coins?



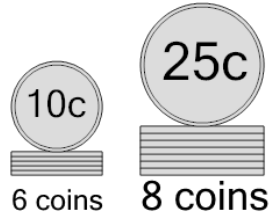
a 200 cents	b 215 cents
c 190 cents	d 216 cents
e 210 cents	f 180 cents

3 What is the total value of these stacks of coins?



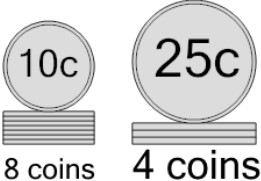
a 190 cents	b 115 cents
c 140 cents	d 151 cents
e 165 cents	f 160 cents

4 What is the total value of these stacks of coins?



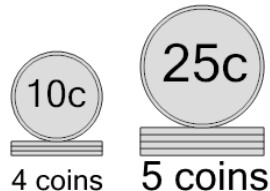
a 260 cents	b 280 cents
c 285 cents	d 250 cents
e 286 cents	f 270 cents

5 What is the total value of these stacks of coins?



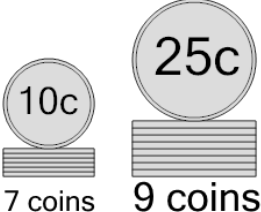
a 180 cents	b 205 cents
c 200 cents	d 170 cents
e 155 cents	f 190 cents

6 What is the total value of these stacks of coins?



a 170 cents	b 166 cents
c 165 cents	d 175 cents
e 190 cents	f 185 cents

7 What is the total value of these stacks of coins?



a 305 cents	b 306 cents
c 295 cents	d 320 cents
e 285 cents	f 270 cents