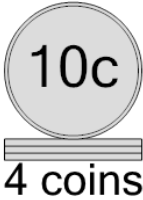




Math worksheet on 'Coin Math - Count Piles - Dimes (Level 1)'. Part of a broader unit on 'Coin Math - Multiplication Intro'


Learn online: app.mobius.academy/math/units/coin_math_multiplication_intro/

1 What is the total value of this stack of coins?



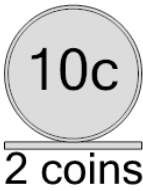
a 75 cents	b 66 cents
c 30 cents	d 40 cents

2 What is the total value of this stack of coins?



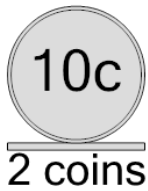
a 40 cents	b 65 cents
c 55 cents	d 30 cents
e 50 cents	f 60 cents

3 What is the total value of this stack of coins?



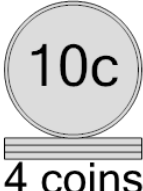
a 10 cents	b 20 cents
c 55 cents	d 30 cents
e 40 cents	f 31 cents

4 What is the total value of this stack of coins?



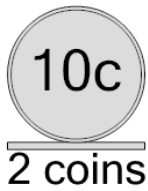
a 40 cents	b 46 cents
c 45 cents	d 31 cents
e 10 cents	f 20 cents

5 What is the total value of this stack of coins?



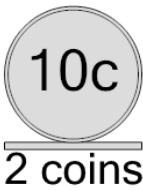
a 40 cents	b 45 cents
c 60 cents	d 30 cents
e 70 cents	f 50 cents

6 What is the total value of this stack of coins?



a 21 cents	b 31 cents
c 20 cents	d 30 cents
e 50 cents	f 10 cents

7 What is the total value of this stack of coins?



a 21 cents	b 10 cents
c 31 cents	d 40 cents
e 46 cents	f 20 cents