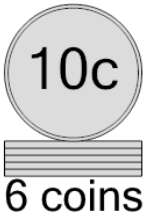




Math worksheet on 'Coin Math - Count Piles - Dimes (Level 2)'. Part of a broader unit on 'Coin Math - Multiplication Practice'


Learn online: app.mobius.academy/math/units/coin_math_multiplication_practice/

1 What is the total value of this stack of coins?



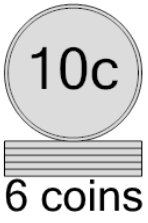
a 70 cents	b 71 cents
c 80 cents	d 60 cents
e 50 cents	f 65 cents

2 What is the total value of this stack of coins?




a 31 cents	b 30 cents
c 50 cents	d 20 cents
e 40 cents	

3 What is the total value of this stack of coins?




a 70 cents	b 80 cents
c 50 cents	d 60 cents

4 What is the total value of this stack of coins?




a 36 cents	b 40 cents
c 35 cents	d 45 cents
e 30 cents	f 20 cents

5 What is the total value of this stack of coins?



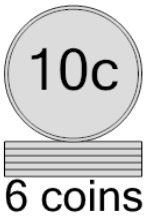
a 35 cents	b 41 cents
c 30 cents	d 40 cents
e 20 cents	f 50 cents

6 What is the total value of this stack of coins?



a 45 cents	b 50 cents
c 46 cents	d 40 cents
e 65 cents	f 30 cents

7 What is the total value of this stack of coins?



a 70 cents	b 50 cents
c 60 cents	d 85 cents