

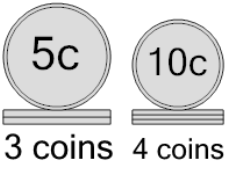


Math worksheet on 'Coin Math - Count Piles - Nickels and Dimes (Level 1)'. Part of a broader unit on 'Coin Math - Multiplication Intro'

Learn online: app.mobius.academy/math/units/coin_math_multiplication_intro/

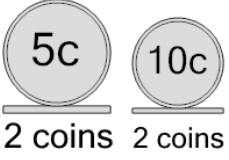
1 What is the total value of these stacks of coins?

a 55 cents	b 81 cents
c 65 cents	d 57 cents
e 85 cents	f 45 cents



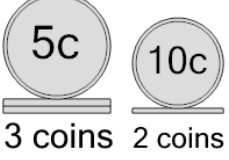
2 What is the total value of these stacks of coins?

a 56 cents	b 30 cents
c 50 cents	d 25 cents
e 20 cents	f 40 cents



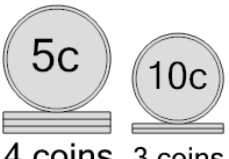
3 What is the total value of these stacks of coins?

a 30 cents	b 35 cents
c 40 cents	d 45 cents



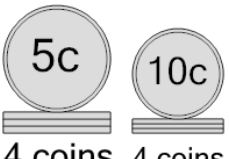
4 What is the total value of these stacks of coins?

a 51 cents	b 60 cents
c 40 cents	d 55 cents
e 50 cents	



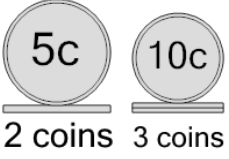
5 What is the total value of these stacks of coins?

a 50 cents	b 55 cents
c 60 cents	d 95 cents
e 70 cents	



6 What is the total value of these stacks of coins?

a 40 cents	b 45 cents
c 42 cents	d 60 cents
e 50 cents	f 41 cents



7 What is the total value of these stacks of coins?

a 30 cents	b 35 cents
c 40 cents	d 45 cents
e 55 cents	f 60 cents

