




Math worksheet on 'Coin Math - Count Piles - Nickels (Level 1)'. Part of a broader unit on 'Coin Math - Multiplication Intro'


Learn online: [app.mobius.academy/math/units/coin\\_math\\_multiplication\\_intro/](http://app.mobius.academy/math/units/coin_math_multiplication_intro/)

**1** What is the total value of this stack of coins?



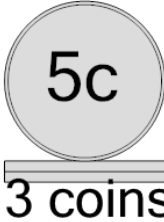
<b>a</b> 20 cents	<b>b</b> 15 cents
<b>c</b> 5 cents	<b>d</b> 12 cents
<b>e</b> 10 cents	<b>f</b> 36 cents

**2** What is the total value of this stack of coins?



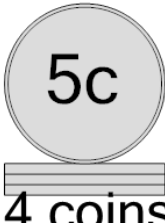
<b>a</b> 40 cents	<b>b</b> 15 cents
<b>c</b> 20 cents	<b>d</b> 10 cents
<b>e</b> 5 cents	

**3** What is the total value of this stack of coins?



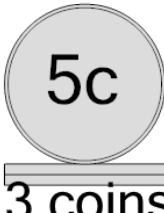
<b>a</b> 10 cents	<b>b</b> 20 cents
<b>c</b> 25 cents	<b>d</b> 15 cents

**4** What is the total value of this stack of coins?




<b>a</b> 30 cents	<b>b</b> 50 cents
<b>c</b> 20 cents	<b>d</b> 35 cents
<b>e</b> 25 cents	<b>f</b> 15 cents

**5** What is the total value of this stack of coins?




<b>a</b> 20 cents	<b>b</b> 30 cents
<b>c</b> 25 cents	<b>d</b> 15 cents
<b>e</b> 10 cents	

**6** What is the total value of this stack of coins?



<b>a</b> 15 cents	<b>b</b> 12 cents
<b>c</b> 20 cents	<b>d</b> 10 cents

**7** What is the total value of this stack of coins?



<b>a</b> 11 cents	<b>b</b> 10 cents
<b>c</b> 35 cents	<b>d</b> 15 cents
<b>e</b> 20 cents	<b>f</b> 60 cents