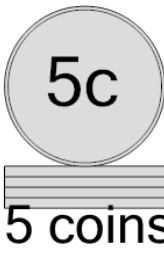




Math worksheet on 'Coin Math - Count Piles - Nickels (Level 2)'. Part of a broader unit on 'Multiplication From Counting - Intro'


Learn online: app.mobius.academy/math/units/multiplication_from_counting_intro/

1 What is the total value of this stack of coins?



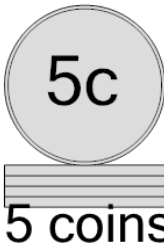
| | |
|----------------------|----------------------|
| a 20 cents | b 35 cents |
| c 30 cents | d 25 cents |
| | |

2 What is the total value of this stack of coins?




| | |
|----------------------|----------------------|
| a 30 cents | b 35 cents |
| c 15 cents | d 20 cents |
| e 40 cents | f 25 cents |

3 What is the total value of this stack of coins?



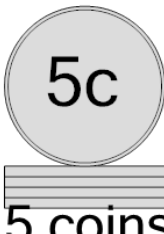
| | |
|----------------------|----------------------|
| a 25 cents | b 51 cents |
| c 30 cents | d 20 cents |
| e 26 cents | f 31 cents |

4 What is the total value of this stack of coins?



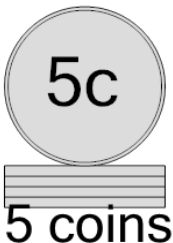
| | |
|----------------------|----------------------|
| a 35 cents | b 25 cents |
| c 55 cents | d 40 cents |
| e 30 cents | |

5 What is the total value of this stack of coins?



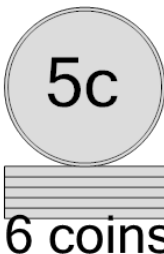
| | |
|----------------------|----------------------|
| a 25 cents | b 30 cents |
| c 35 cents | d 20 cents |
| e 31 cents | |

6 What is the total value of this stack of coins?



| | |
|----------------------|----------------------|
| a 25 cents | b 20 cents |
| c 55 cents | d 35 cents |
| e 30 cents | |

7 What is the total value of this stack of coins?



| | |
|----------------------|----------------------|
| a 36 cents | b 30 cents |
| c 40 cents | d 55 cents |
| e 35 cents | f 25 cents |