

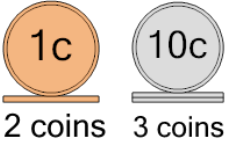


Math worksheet on 'Coin Math - Count Piles - Pennies and Dimes (Level 1)'. Part of a broader unit on 'Coin Math - Multiplication Intro'

Learn online: app.mobius.academy/math/units/coin_math_multiplication_intro/

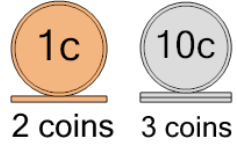
1 What is the total value of these stacks of coins?

a 43 cents	b 33 cents
c 37 cents	d 57 cents
e 42 cents	f 32 cents



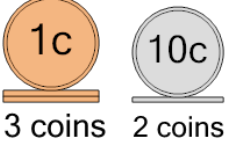
2 What is the total value of these stacks of coins?

a 42 cents	b 32 cents
c 43 cents	d 33 cents
e 67 cents	f 22 cents



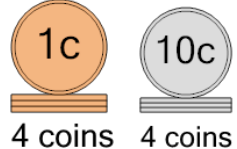
3 What is the total value of these stacks of coins?

a 28 cents	b 34 cents
c 43 cents	d 48 cents
e 33 cents	f 23 cents



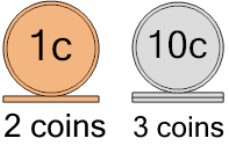
4 What is the total value of these stacks of coins?

a 34 cents	b 46 cents
c 69 cents	d 64 cents
e 45 cents	f 44 cents



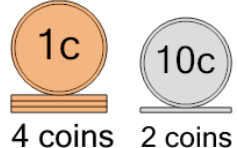
5 What is the total value of these stacks of coins?

a 37 cents	b 22 cents
c 42 cents	d 57 cents
e 32 cents	



6 What is the total value of these stacks of coins?

a 25 cents	b 14 cents
c 59 cents	d 23 cents
e 24 cents	



7 What is the total value of these stacks of coins?

a 34 cents	b 32 cents
c 42 cents	d 37 cents
e 22 cents	f 31 cents

