



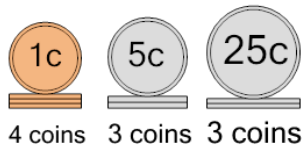
Math worksheet on 'Coin Math - Count Piles - Pennies, Nickels, Quarters (Level 2)'. Part of a broader unit on 'Multiplication From Counting - Practice'

Learn online:

app.mobius.academy/math/units/multiplication_from_counting_practice/

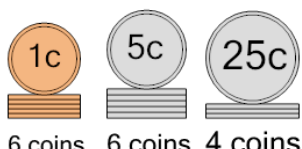
1 What is the total value of these stacks of coins?

a 95 cents	b 119 cents
c 99 cents	d 94 cents
e 129 cents	f 144 cents



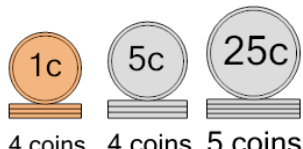
2 What is the total value of these stacks of coins?

a 136 cents	b 135 cents
c 131 cents	d 137 cents
e 161 cents	f 147 cents



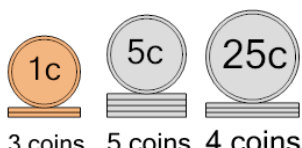
3 What is the total value of these stacks of coins?

a 199 cents	b 184 cents
c 149 cents	d 148 cents
e 151 cents	f 159 cents



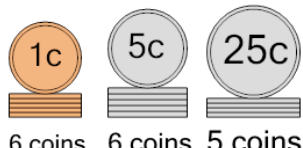
4 What is the total value of these stacks of coins?

a 130 cents	b 133 cents
c 153 cents	d 103 cents
e 128 cents	f 127 cents



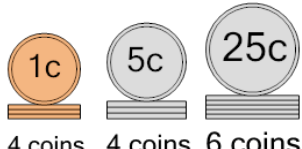
5 What is the total value of these stacks of coins?

a 171 cents	b 162 cents
c 163 cents	d 211 cents
e 160 cents	f 161 cents



6 What is the total value of these stacks of coins?

a 189 cents	b 224 cents
c 199 cents	d 174 cents
e 184 cents	f 179 cents



7 What is the total value of these stacks of coins?

a 108 cents	b 103 cents
c 138 cents	d 83 cents
e 118 cents	f 109 cents

