

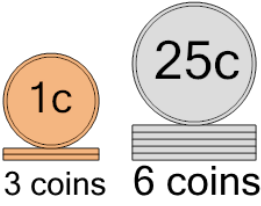


Math worksheet on 'Coin Math - Count Piles - Pennies and Quarters (Level 2)'. Part of a broader unit on 'Multiplication From Counting - Practice'

Learn online:

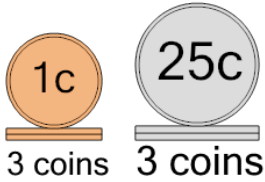
app.mobius.academy/math/units/multiplication_from_counting_practice/

1 What is the total value of these stacks of coins?



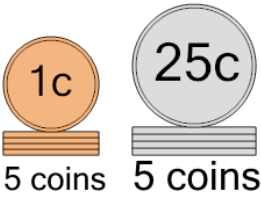
a 155 cents	b 153 cents
c 178 cents	d 128 cents
e 152 cents	

2 What is the total value of these stacks of coins?



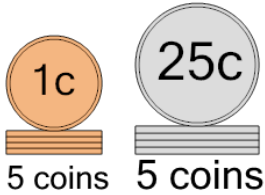
a 79 cents	b 80 cents
c 88 cents	d 53 cents
e 78 cents	f 103 cents

3 What is the total value of these stacks of coins?



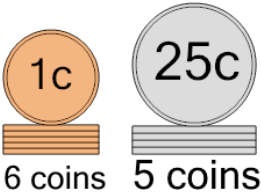
a 141 cents	b 129 cents
c 180 cents	d 130 cents
e 135 cents	f 155 cents

4 What is the total value of these stacks of coins?



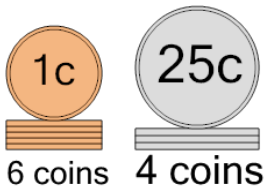
a 131 cents	b 132 cents
c 180 cents	d 130 cents
e 136 cents	f 155 cents

5 What is the total value of these stacks of coins?



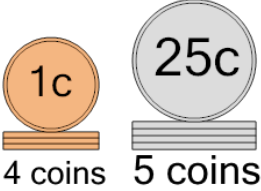
a 146 cents	b 133 cents
c 130 cents	d 131 cents
e 156 cents	f 166 cents

6 What is the total value of these stacks of coins?



a 107 cents	b 105 cents
c 106 cents	d 136 cents
e 81 cents	f 141 cents

7 What is the total value of these stacks of coins?



a 131 cents	b 154 cents
c 140 cents	d 130 cents
e 104 cents	f 129 cents