




Math worksheet on 'Coin Math - Count Piles - Pennies (Level 1)'. Part of a broader unit on 'Coin Math - Multiplication Intro'

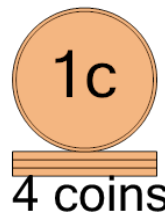
Learn online: app.mobius.academy/math/units/coin_math_multiplication_intro/

1 What is the total value of this stack of coins?




a 2 cents	b 3 cents
c 1 cents	d 4 cents

2 What is the total value of this stack of coins?



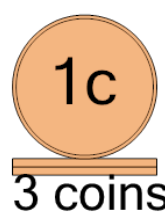
a 5 cents	b 4 cents
c 30 cents	d 3 cents
e 14 cents	

3 What is the total value of this stack of coins?




a 2 cents	b 5 cents
c 4 cents	d 3 cents
e 38 cents	

4 What is the total value of this stack of coins?



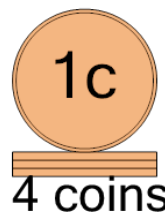
a 2 cents	b 33 cents
c 3 cents	d 38 cents
e 4 cents	

5 What is the total value of this stack of coins?




a 1 cents	b 2 cents
c 12 cents	

6 What is the total value of this stack of coins?



a 3 cents	b 14 cents
c 5 cents	d 6 cents
e 4 cents	f 10 cents

7 What is the total value of this stack of coins?



a 4 cents	b 2 cents
c 3 cents	d 5 cents