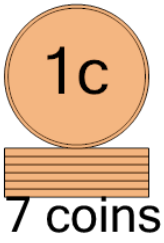




Math worksheet on 'Coin Math - Count Piles - Pennies (Level 3)'. Part of a broader unit on 'Multiplication From Counting - Intro'

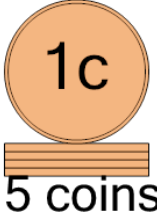
Learn online: app.mobius.academy/math/units/multiplication_from_counting_intro/

1 What is the total value of this stack of coins?



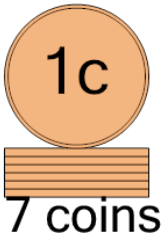
a 8 cents	b 9 cents
c 7 cents	d 6 cents
e 32 cents	

2 What is the total value of this stack of coins?




a 4 cents	b 40 cents
c 5 cents	d 7 cents
e 15 cents	f 6 cents

3 What is the total value of this stack of coins?



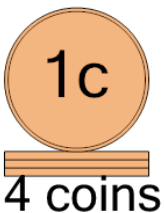
a 13 cents	b 17 cents
c 8 cents	d 6 cents
e 9 cents	f 7 cents

4 What is the total value of this stack of coins?



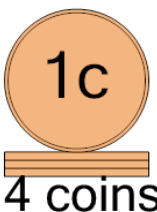
a 9 cents	b 10 cents
c 19 cents	d 8 cents
e 7 cents	f 18 cents

5 What is the total value of this stack of coins?



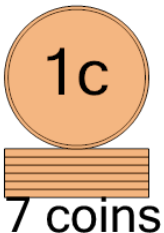
a 4 cents	b 29 cents
c 5 cents	d 3 cents
e 6 cents	f 10 cents

6 What is the total value of this stack of coins?



a 5 cents	b 4 cents
c 3 cents	d 10 cents

7 What is the total value of this stack of coins?



a 8 cents	b 9 cents
c 17 cents	d 7 cents
e 6 cents	