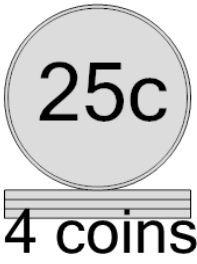




Math worksheet on 'Coin Math - Count Piles - Quarters (Level 2)'. Part of a broader unit on 'Multiplication From Counting - Intro'


Learn online: app.mobius.academy/math/units/multiplication_from_counting_intro/

1 What is the total value of this stack of coins?



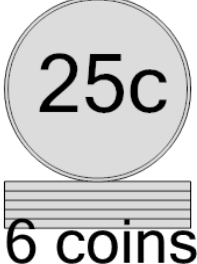
a 75 cents	b 110 cents
c 150 cents	d 125 cents
e 111 cents	f 100 cents

2 What is the total value of this stack of coins?




a 50 cents	b 85 cents
c 100 cents	d 75 cents
e 125 cents	f 90 cents

3 What is the total value of this stack of coins?



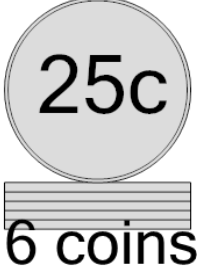
a 125 cents	b 150 cents
c 161 cents	d 175 cents
e 200 cents	

4 What is the total value of this stack of coins?



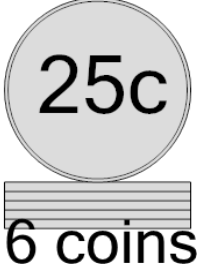
a 125 cents	b 100 cents
c 50 cents	d 101 cents
e 75 cents	

5 What is the total value of this stack of coins?




a 175 cents	b 160 cents
c 200 cents	d 125 cents
e 150 cents	

6 What is the total value of this stack of coins?



a 200 cents	b 160 cents
c 125 cents	d 175 cents
e 150 cents	

7 What is the total value of this stack of coins?



a 150 cents	b 160 cents
c 175 cents	d 100 cents
e 125 cents	