




Math worksheet on 'Coin Math - Identify Coins - Picture to Name (Level 1)'. Part of a broader unit on 'Coin Math - Intro'


Learn online: [app.mobius.academy/math/units/coin\\_math\\_intro/](http://app.mobius.academy/math/units/coin_math_intro/)

**1** What is the name of this coin?




<b>a</b> Quarter	<b>b</b> Nickel
<b>c</b> Dime	<b>d</b> Penny

**2** What is the name of this coin?




<b>a</b> Penny	<b>b</b> Nickel
<b>c</b> Dime	<b>d</b> Quarter

**3** What is the name of this coin?




<b>a</b> Nickel	<b>b</b> Penny
<b>c</b> Quarter	<b>d</b> Dime

**4** What is the name of this coin?




<b>a</b> Penny	<b>b</b> Quarter
<b>c</b> Dime	<b>d</b> Nickel

**5** What is the name of this coin?




<b>a</b> Nickel	<b>b</b> Penny
<b>c</b> Quarter	<b>d</b> Dime

**6** What is the name of this coin?



<b>a</b> Penny	<b>b</b> Nickel
<b>c</b> Quarter	<b>d</b> Dime

**7** What is the name of this coin?



<b>a</b> Penny	<b>b</b> Dime
<b>c</b> Quarter	<b>d</b> Nickel