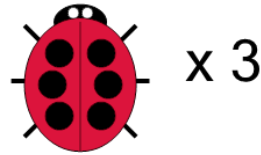




Math worksheet on 'Counting in Groups - Picture and Count (Ladybug Spots) (Level 1)'. Part of a broader unit on 'Multiplication From Counting - Intro'

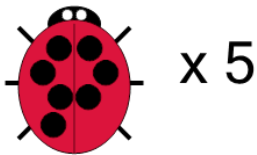
Learn online: app.mobius.academy/math/units/multiplication_from_counting_intro/

1 Each ladybug has 6 spots.
How many spots would there be on 3 ladybugs?



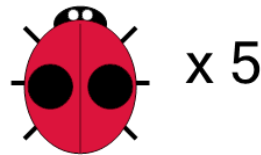
a	b	c
22	13	14
d	e	f
18	15	16

2 Each ladybug has 7 spots.
How many spots would there be on 5 ladybugs?



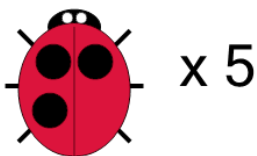
a	b	c
32	38	33
d	e	f
37	30	35

3 Each ladybug has 2 spots.
How many spots would there be on 5 ladybugs?




a	b	c
13	10	8
d	e	
5	14	

4 Each ladybug has 3 spots.
How many spots would there be on 5 ladybugs?




a	b	c
13	18	15
d		
10		

5 Each ladybug has 6 spots.
How many spots would there be on 6 ladybugs?



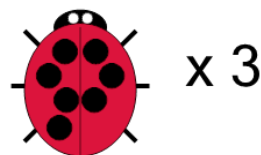
a	b	c
34	32	36
d	e	
38	33	

6 Each ladybug has 8 spots.
How many spots would there be on 3 ladybugs?



a	b	c
27	19	20
d	e	
24	22	

7 Each ladybug has 7 spots.
How many spots would there be on 3 ladybugs?



a	b	c
25	23	18
d	e	f
21	19	16