




Math worksheet on 'Counting in Groups - Picture and Count (Ladybug Spots) (Level 2)'. Part of a broader unit on 'Multiplication From Counting - Intro'

Learn online: app.mobius.academy/math/units/multiplication_from_counting_intro/


1 Each ladybug has 8 spots. How many spots would there be on 9 ladybugs?

a	b	c
70	69	74
d	e	
75	72	

 x 9


2 Each ladybug has 3 spots. How many spots would there be on 3 ladybugs?

a	b	c
13	9	11
d	e	f
4	5	12

 x 3


3 Each ladybug has 7 spots. How many spots would there be on 3 ladybugs?

a	b	c
21	16	17
d	e	f
24	25	19

 x 3


4 Each ladybug has 3 spots. How many spots would there be on 4 ladybugs?

a	b	c
14	7	15
d	e	
16	12	

 x 4


5 Each ladybug has 6 spots. How many spots would there be on 8 ladybugs?

a	b	c
50	48	46

 x 8


6 Each ladybug has 8 spots. How many spots would there be on 4 ladybugs?

a	b	c
32	35	28

 x 4

7 Each ladybug has 6 spots. How many spots would there be on 6 ladybugs?

a	b	c
33	38	40
d	e	
36	34	

 x 6