

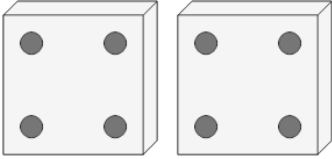


Math worksheet on 'Counting in Groups - Pictures (Dice) (Level 1)'. Part of a broader unit on 'Multiplication From Counting - Intro'

Learn online: app.mobius.academy/math/units/multiplication_from_counting_intro/

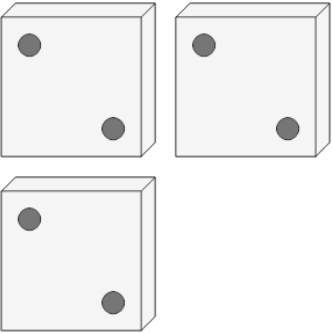
1 Each dice has 4 dots. How many dots in total?

a	b	c
8	11	12
d	e	f
4	3	10



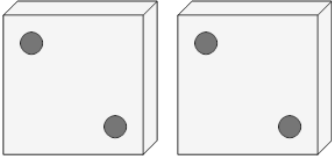
2 Each dice has 2 dots. How many dots in total?

a	b	c
2	10	8
d	e	
4	6	



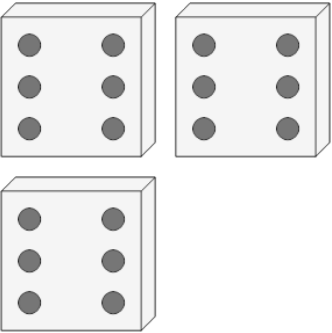
3 Each dice has 2 dots. How many dots in total?

a	b	c
8	7	4
d	e	
1	2	



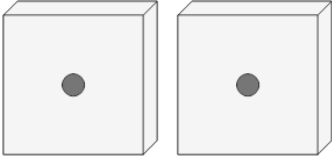
4 Each dice has 6 dots. How many dots in total?

a	b	c
16	20	18



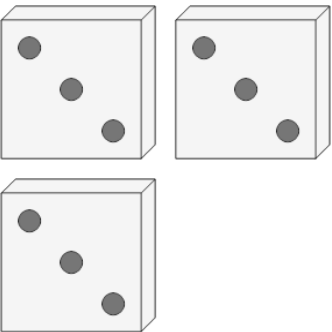
5 Each dice has 1 dots. How many dots in total?

a	b	c
5	2	0



6 Each dice has 3 dots. How many dots in total?

a	b	c
11	6	13
d	e	
5	9	



7 Each dice has 3 dots. How many dots in total?

a	b	c
12	6	11
d	e	
9	7	

