

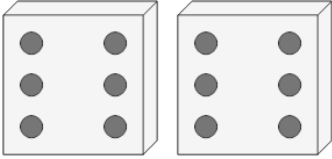


Math worksheet on 'Counting in Groups - Pictures (Dice) (Level 2)'. Part of a broader unit on 'Multiplication From Counting - Intro'

Learn online: app.mobius.academy/math/units/multiplication_from_counting_intro/

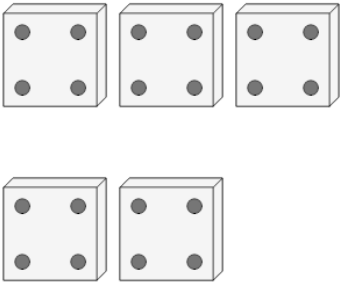
1 Each dice has 6 dots. How many dots in total?

a	b	c
16	12	7



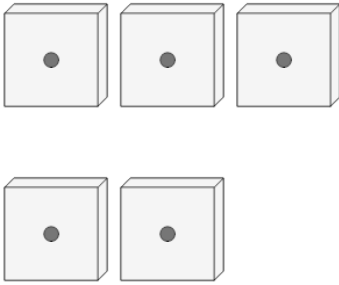
2 Each dice has 4 dots. How many dots in total?

a	b	c
20	15	24



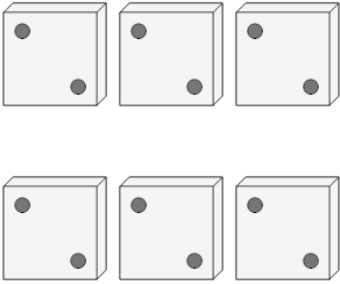
3 Each dice has 1 dots. How many dots in total?

a	b	c
2	0	1
d	e	
8	5	



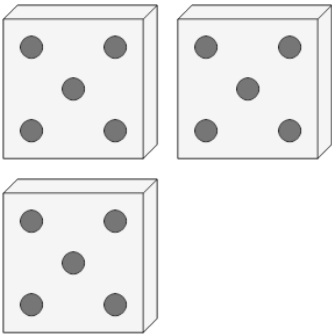
4 Each dice has 2 dots. How many dots in total?

a	b	c
12	15	10
d		
16		



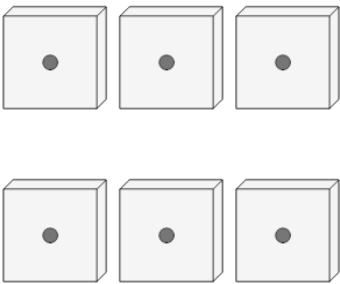
5 Each dice has 5 dots. How many dots in total?

a	b	c
15	12	10
d	e	
11	17	



6 Each dice has 1 dots. How many dots in total?

a	b	c
1	10	9
d		
6		



7 Each dice has 6 dots. How many dots in total?

a	b	c
9	10	12
d		
8		

