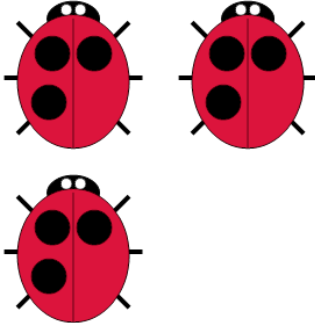




Math worksheet on 'Counting in Groups - Pictures (Ladybug Spots) (Level 1)'. Part of a broader unit on 'Multiplication From Counting - Intro'


Learn online: [app.mobius.academy/math/units/multiplication\\_from\\_counting\\_intro/](http://app.mobius.academy/math/units/multiplication_from_counting_intro/)

**1** Each ladybug has 3 spots. How many spots in total?




|          |          |          |
|----------|----------|----------|
| <b>a</b> | <b>b</b> | <b>c</b> |
| 13       | 9        | 5        |
| <b>d</b> | <b>e</b> | <b>f</b> |
| 4        | 6        | 11       |

**2** Each ladybug has 4 spots. How many spots in total?




|          |          |          |
|----------|----------|----------|
| <b>a</b> | <b>b</b> | <b>c</b> |
| 4        | 8        | 3        |
| <b>d</b> |          |          |
| 10       |          |          |

**3** Each ladybug has 5 spots. How many spots in total?




|          |          |          |
|----------|----------|----------|
| <b>a</b> | <b>b</b> | <b>c</b> |
| 17       | 18       | 13       |
| <b>d</b> | <b>e</b> | <b>f</b> |
| 19       | 15       | 11       |

**4** Each ladybug has 3 spots. How many spots in total?




|          |          |          |
|----------|----------|----------|
| <b>a</b> | <b>b</b> | <b>c</b> |
| 4        | 1        | 8        |
| <b>d</b> | <b>e</b> | <b>f</b> |
| 2        | 9        | 6        |

**5** Each ladybug has 2 spots. How many spots in total?




|          |          |          |
|----------|----------|----------|
| <b>a</b> | <b>b</b> | <b>c</b> |
| 2        | 4        | 8        |
| <b>d</b> |          |          |
| 1        |          |          |

**6** Each ladybug has 3 spots. How many spots in total?



|          |          |          |
|----------|----------|----------|
| <b>a</b> | <b>b</b> | <b>c</b> |
| 2        | 8        | 3        |
| <b>d</b> | <b>e</b> | <b>f</b> |
| 6        | 10       | 4        |

**7** Each ladybug has 4 spots. How many spots in total?



|          |          |          |
|----------|----------|----------|
| <b>a</b> | <b>b</b> | <b>c</b> |
| 5        | 3        | 8        |
| <b>d</b> | <b>e</b> |          |
| 11       | 4        |          |