




Math worksheet on 'Counting in Groups - Pictures (Ladybug Spots) (Level 2)'. Part of a broader unit on 'Multiplication From Counting - Intro'

Learn online: [app.mobius.academy/math/units/multiplication\\_from\\_counting\\_intro/](http://app.mobius.academy/math/units/multiplication_from_counting_intro/)


**1** Each ladybug has 4 spots.  
How many spots in total?

<b>a</b>	<b>b</b>	<b>c</b>
10	4	8
<b>d</b>		
11		




**2** Each ladybug has 8 spots.  
How many spots in total?

<b>a</b>	<b>b</b>	<b>c</b>
44	48	45
<b>d</b>	<b>e</b>	
51	52	




**3** Each ladybug has 4 spots.  
How many spots in total?

<b>a</b>	<b>b</b>	<b>c</b>
15	18	20
<b>d</b>	<b>e</b>	<b>f</b>
16	22	24




**4** Each ladybug has 7 spots.  
How many spots in total?

<b>a</b>	<b>b</b>	<b>c</b>
39	40	42
<b>d</b>	<b>e</b>	<b>f</b>
45	46	38




**5** Each ladybug has 4 spots.  
How many spots in total?

<b>a</b>	<b>b</b>	<b>c</b>
16	20	17
<b>d</b>	<b>e</b>	
15	18	



**6** Each ladybug has 6 spots.  
How many spots in total?

<b>a</b>	<b>b</b>	<b>c</b>
36	40	32
<b>d</b>	<b>e</b>	
31	33	



**7** Each ladybug has 5 spots.  
How many spots in total?

<b>a</b>	<b>b</b>	<b>c</b>
29	28	25
<b>d</b>	<b>e</b>	<b>f</b>
22	23	20

