

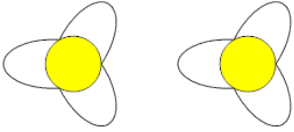


Math worksheet on 'Counting in Groups - Pictures (Flower Petals) (Level 1)'. Part of a broader unit on 'Multiplication From Counting - Intro'

Learn online: app.mobius.academy/math/units/multiplication_from_counting_intro/

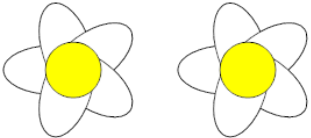
1 Each flower has 3 petals. How many petals in total?

a	b	c
3	2	10
d	e	f
9	6	4




2 Each flower has 5 petals. How many petals in total?

a	b	c
7	10	5
d	e	f
8	14	12




3 Each flower has 9 petals. How many petals in total?

a	b	c
22	14	18
d	e	f
13	21	15




4 Each flower has 9 petals. How many petals in total?

a	b	c
22	18	13
d		
15		



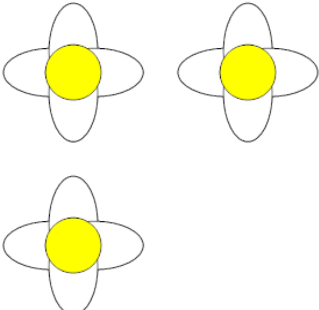
5 Each flower has 9 petals. How many petals in total?

a	b	c
18	16	22
d	e	f
14	21	20



6 Each flower has 4 petals. How many petals in total?

a	b	c
14	12	16
d		
15		



7 Each flower has 8 petals. How many petals in total?

a	b	c
12	11	19
d	e	
18	16	

