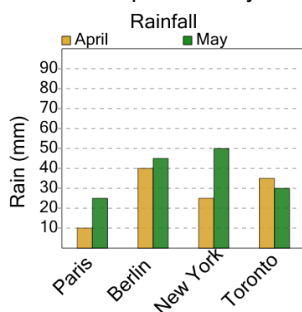




## Graphing - Bar Graph (Double) - Difference at Point

1

How much more rain was there during may than april in new york?



A

35

B

25

C

0

D

5

E

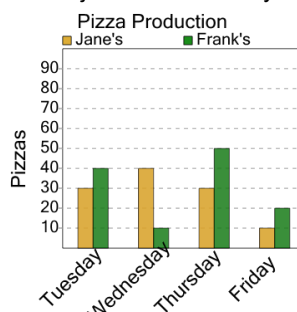
55

F

60

2

How many more pizzas did frank's make than jane's on thursday?



A

30

B

20

C

0

D

80

E

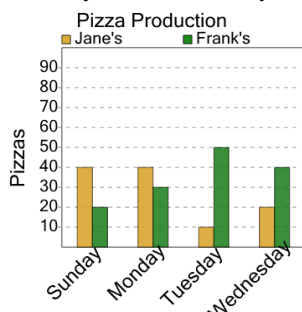
90

F

10

3

How many more pizzas did frank's make than jane's on tuesday?



A

90

B

100

C

80

D

40

E

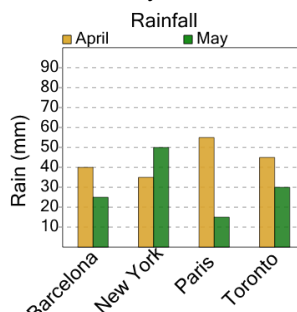
60

F

30

4

How much more rain was there during april than may in barcelona?



A

20

B

15

C

25

D

5

E

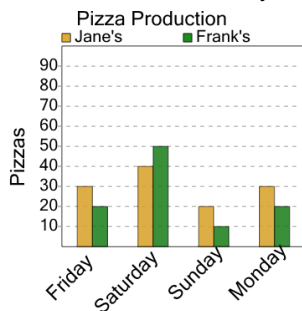
50

F

10

5

How many more pizzas did jane's make than frank's on sunday?



A

30

B

20

C

70

D

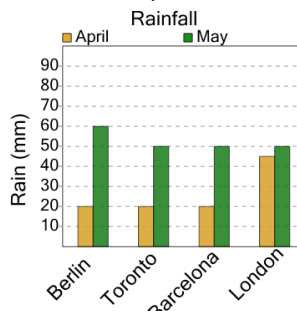
10

E

40

6

How much more rain was there during may than april in berlin?



A

55

B

0

C

70

D

45

E

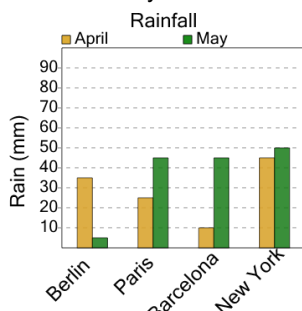
25

F

40

7

How much more rain was there during april than may in barcelona?



A

5

B

60

C

70

D

45

E

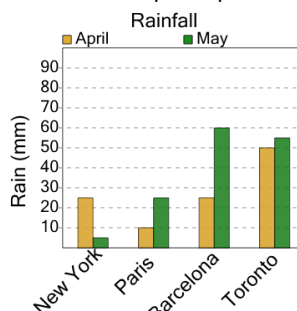
35

F

10

8

How much more rain was there during may than april in paris?



A

45

B

15

C

35

D

10

E

5

F

50