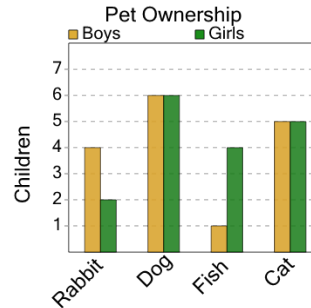




Math worksheet on 'Graphing - Bar Graph (Double) - Difference of Two (Level 1)'. Part of a broader unit on 'Data and Graphs - Advanced'

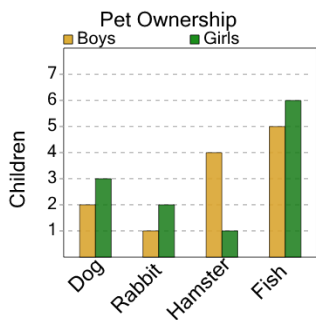
Learn online: app.mobius.academy/math/units/data_graphing_advanced/

1 How many more girls have a dog than boys have a cat as a pet?



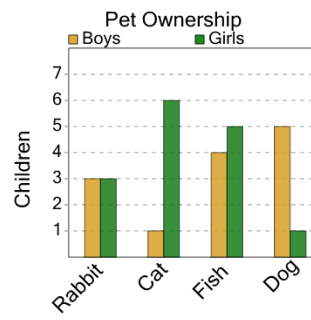
a	b	c
1	7	0
d	e	f
6	8	2

2 How many more girls have a fish than boys have a dog as a pet?



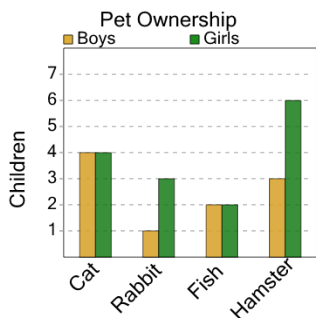
a	b	c
8	4	10
d	e	f
0	7	3

3 How many more girls have a rabbit than boys have a cat as a pet?



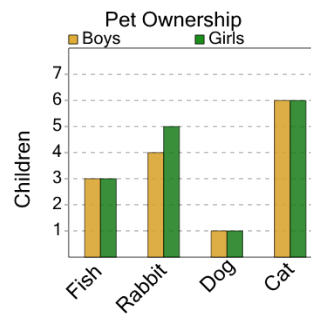
a	b	c
2	5	6
d	e	f
4	1	8

4 How many more girls have a rabbit than boys have a fish as a pet?



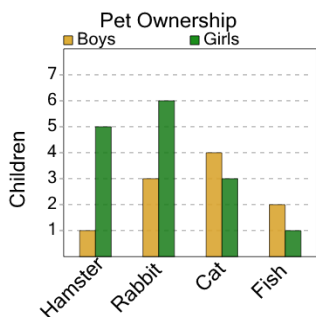
a	b	c
1	2	0
d	e	f
5	7	3

5 How many more girls have a rabbit than boys have a fish as a pet?



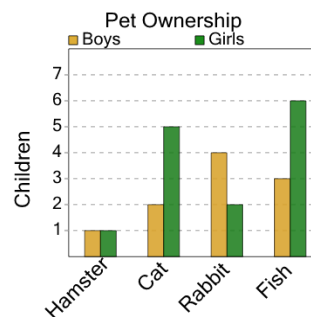
a	b	c
0	6	2
d	e	f
8	1	9

6 How many more girls have a cat than boys have a hamster as a pet?



a	b	c
2	3	4
d	e	f
6	8	

7 How many more girls have a fish than boys have a cat as a pet?



a	b	c
10	8	1
d	e	f
4	3	6