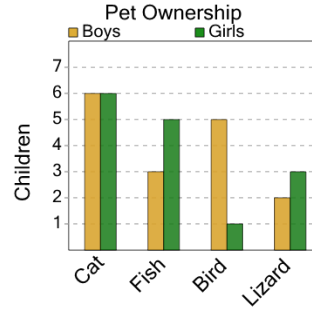




Math worksheet on 'Graphing - Bar Graph (Double) - Maximum of Series (Level 1)'. Part of a broader unit on 'Data and Graphs - Practice'

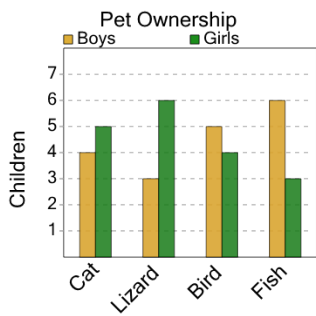
Learn online: app.mobius.academy/math/units/data_graphing_practice/

1 What pet do the LARGEST number of girls have?



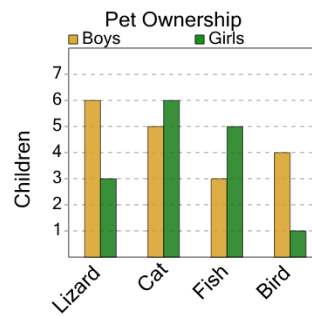
a	Fish	b	Cat
c	Lizard	d	Bird

2 What pet do the LARGEST number of boys have?



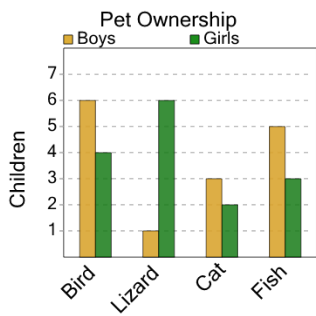
a	Cat	b	Fish
c	Lizard	d	Bird

3 What pet do the LARGEST number of girls have?



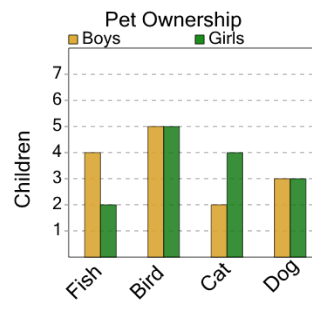
a	Lizard	b	Cat
c	Fish	d	Bird

4 What pet do the LARGEST number of boys have?



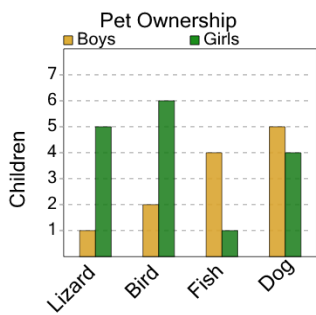
a	Cat	b	Fish
c	Bird	d	Lizard

5 What pet do the LARGEST number of boys have?



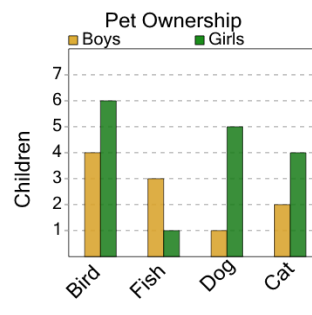
a	Fish	b	Cat	c	Dog
d	Bird				

6 What pet do the LARGEST number of girls have?



a	Dog	b	Lizard
c	Bird	d	Fish

7 What pet do the LARGEST number of boys have?



a	Dog	b	Bird	c	Cat
d	Fish				