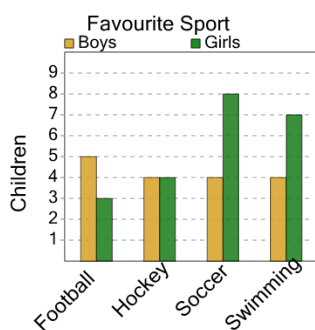




Math worksheet on 'Graphing - Bar Graph (Double) - Maximum Overall (Level 2)'. Part of a broader unit on 'Data and Graphs - Practice'

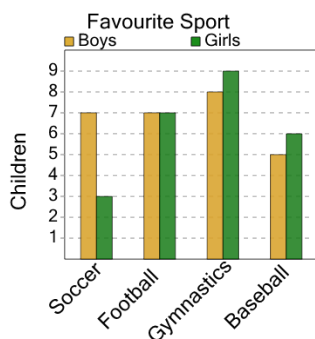
Learn online: app.mobius.academy/math/units/data_graphing_practice/

2 What sport do the largest number of either boys or girls like?



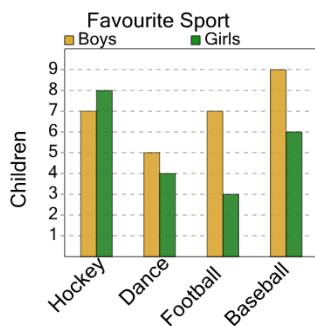
- a Boys / Swimming
- b Girls / Soccer
- c Girls / Hockey
- d Girls / Football

4 What sport do the largest number of either boys or girls like?



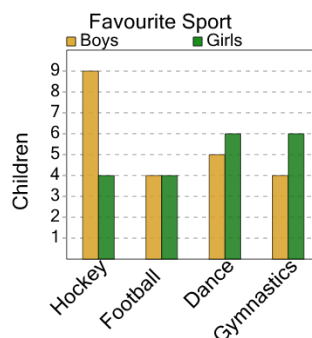
- a Girls / Gymnastics
- b Boys / Soccer
- c Boys / Baseball
- d Girls / Football

6 What sport do the largest number of either boys or girls like?



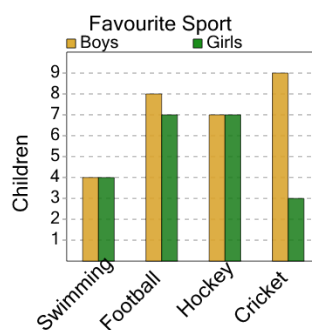
- a Girls / Hockey
- b Boys / Baseball
- c Girls / Dance
- d Boys / Football

1 What sport do the largest number of either boys or girls like?



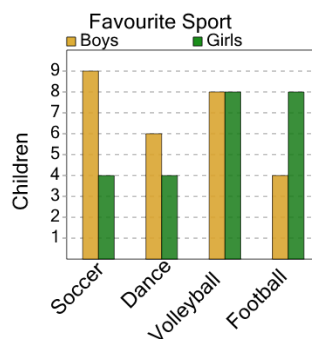
- a Girls / Dance
- b Girls / Football
- c Girls / Gymnastics
- d Boys / Hockey

3 What sport do the largest number of either boys or girls like?



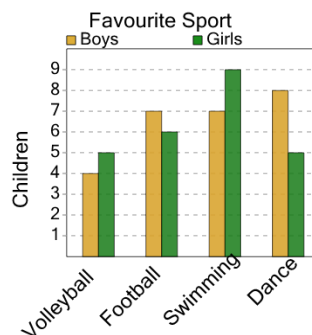
- a Boys / Swimming
- b Boys / Cricket
- c Boys / Hockey

5 What sport do the largest number of either boys or girls like?



- a Boys / Volleyball
- b Girls / Football
- c Girls / Dance
- d Boys / Soccer

7 What sport do the largest number of either boys or girls like?



- a Boys / Football
- b Girls / Swimming
- c Girls / Dance