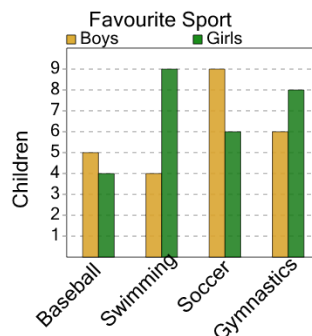




Math worksheet on 'Graphing - Bar Graph (Double) - Minimum of Series (Level 2)'. Part of a broader unit on 'Data and Graphs - Practice'

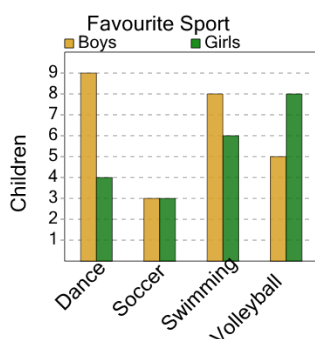
Learn online: app.mobius.academy/math/units/data_graphing_practice/

1 What sport do the smallest number of boys like?



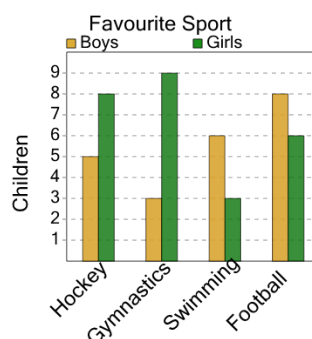
a	Baseball	b	Soccer
c	Gymnastics	d	Swimming

2 What sport do the smallest number of boys like?



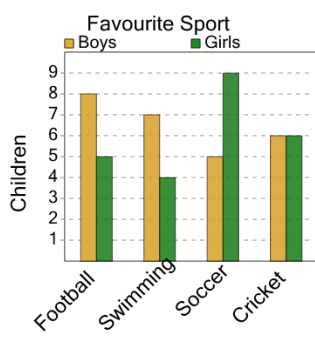
a	Soccer	b	Swimming
c	Volleyball		

3 What sport do the smallest number of boys like?



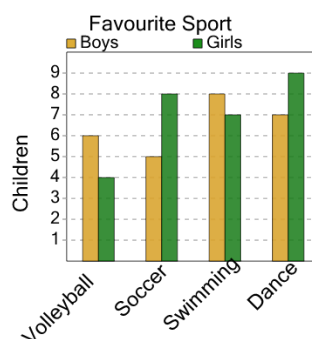
a	Swimming	b	Gymnastics
c	Football	d	Hockey

4 What sport do the smallest number of boys like?



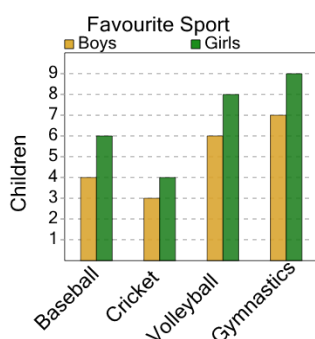
a	Soccer	b	Cricket
c	Football	d	Swimming

5 What sport do the smallest number of boys like?



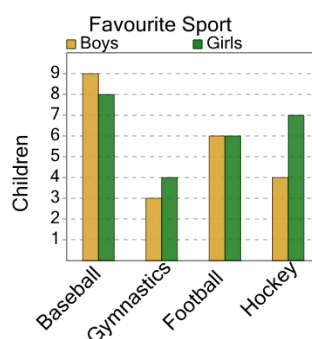
a	Soccer	b	Volleyball
c	Dance		

6 What sport do the smallest number of boys like?



a	Cricket	b	Baseball
c	Volleyball		

7 What sport do the smallest number of boys like?



a	Football	b	Hockey
c	Gymnastics	d	Baseball