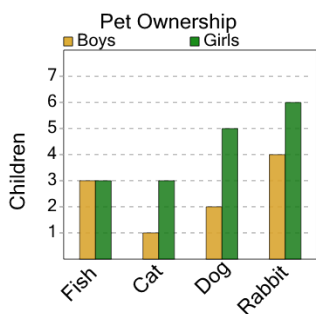




Math worksheet on 'Graphing - Bar Graph (Double) - Minimum Overall (Level 1)'. Part of a broader unit on 'Data and Graphs - Practice'

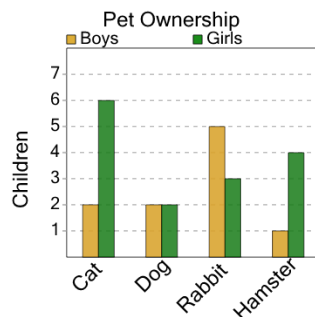
Learn online: app.mobius.academy/math/units/data_graphing_practice/

1 What pet do the smallest number of either boys or girls have?



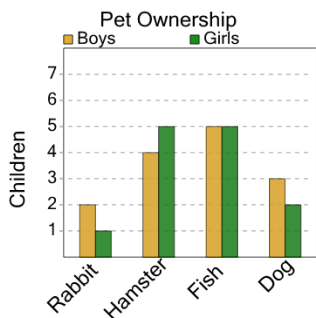
- a Boys / Dog
- b Boys / Fish
- c Boys / Cat
- d Girls / Rabbit

2 What pet do the smallest number of either boys or girls have?



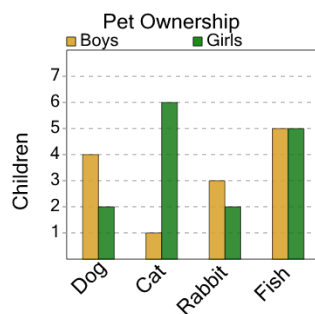
- a Boys / Dog
- b Boys / Cat
- c Boys / Hamster
- d Girls / Rabbit

3 What pet do the smallest number of either boys or girls have?



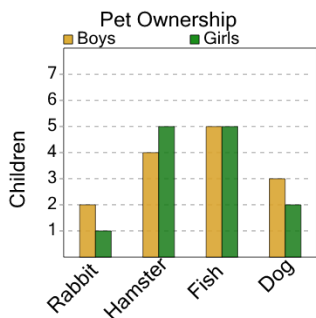
- a Girls / Dog
- b Girls / Rabbit
- c Girls / Hamster

4 What pet do the smallest number of either boys or girls have?



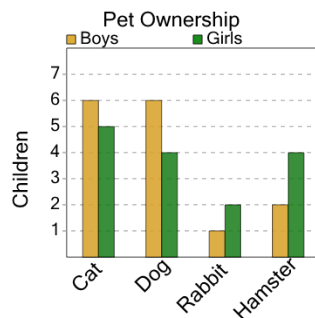
- a Boys / Dog
- b Girls / Rabbit
- c Boys / Cat
- d Boys / Fish

5 What pet do the smallest number of either boys or girls have?



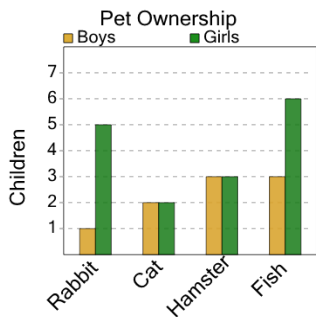
- a Girls / Dog
- b Girls / Rabbit
- c Girls / Hamster

6 What pet do the smallest number of either boys or girls have?



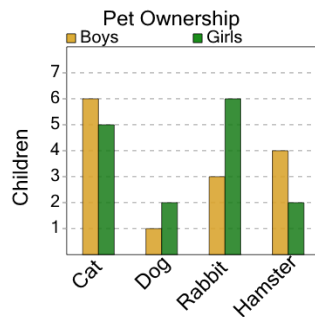
- a Boys / Rabbit
- b Girls / Hamster
- c Girls / Dog
- d Girls / Cat

7 What pet do the smallest number of either boys or girls have?



- a Girls / Cat
- b Girls / Fish
- c Boys / Rabbit

8 What pet do the smallest number of either boys or girls have?



- a Boys / Dog
- b Boys / Rabbit
- c Boys / Cat