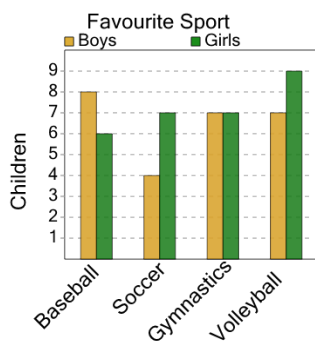




Math worksheet on 'Graphing - Bar Graph (Double) - Minimum Overall (Level 2)'. Part of a broader unit on 'Data and Graphs - Practice'

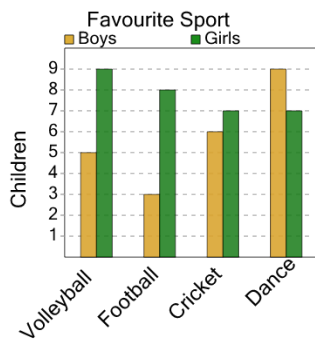
Learn online: app.mobius.academy/math/units/data_graphing_practice/

2 What sport do the smallest number of either boys or girls like most?



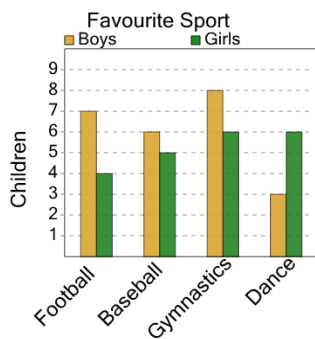
- a Boys / Soccer
- b Boys / Volleyball
- c Boys / Gymnastics
- d Boys / Baseball

4 What sport do the smallest number of either boys or girls like most?



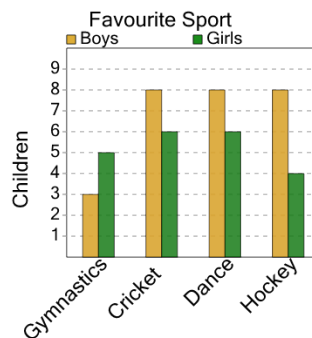
- a Girls / Cricket
- b Boys / Football
- c Girls / Dance
- d Girls / Volleyball

6 What sport do the smallest number of either boys or girls like most?



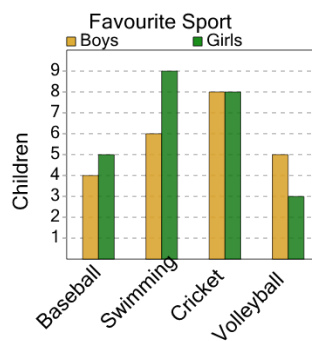
- a Boys / Dance
- b Boys / Football
- c Boys / Gymnastics
- d Boys / Baseball

1 What sport do the smallest number of either boys or girls like most?



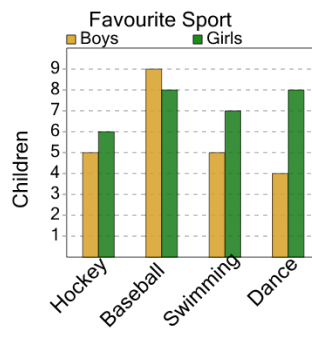
- a Boys / Hockey
- b Boys / Dance
- c Boys / Gymnastics
- d Girls / Cricket

3 What sport do the smallest number of either boys or girls like most?



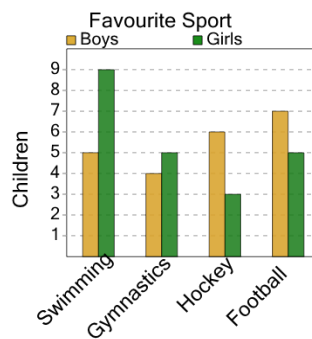
- a Boys / Swimming
- b Girls / Volleyball
- c Girls / Baseball
- d Boys / Cricket

5 What sport do the smallest number of either boys or girls like most?



- a Girls / Baseball
- b Boys / Hockey
- c Boys / Dance
- d Girls / Swimming

7 What sport do the smallest number of either boys or girls like most?



- a Boys / Football
- b Girls / Hockey
- c Girls / Gymnastics
- d Girls / Swimming