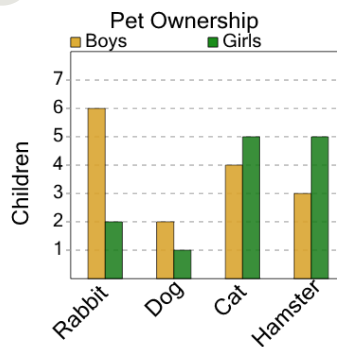




Math worksheet on 'Graphing - Bar Graph (Double) - Minimum at Point (Level 1)'. Part of a broader unit on 'Data and Graphs - Advanced'

Learn online: [app.mobius.academy/math/units/data\\_graphing\\_advanced/](http://app.mobius.academy/math/units/data_graphing_advanced/)

1



Do boys or girls have fewer dogs?

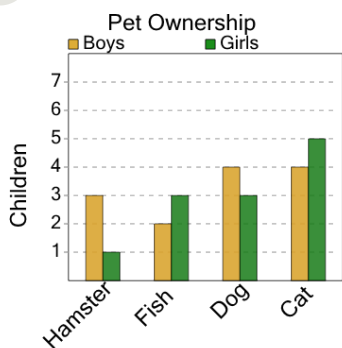
a

Boys

b

Girls

2



Do boys or girls have fewer hamsters?

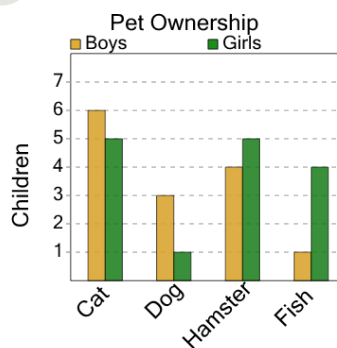
a

Boys

b

Girls

3



Do boys or girls have fewer cats?

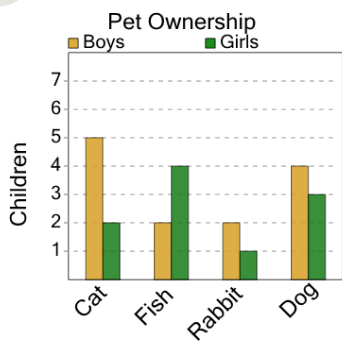
a

Girls

b

Boys

4



Do boys or girls have fewer dogs?

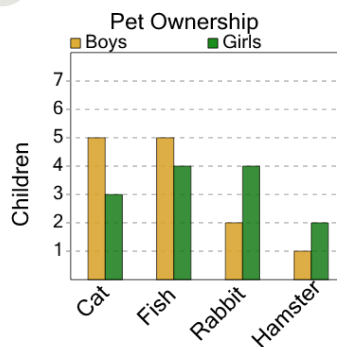
a

Girls

b

Boys

5



Do boys or girls have fewer rabbits?

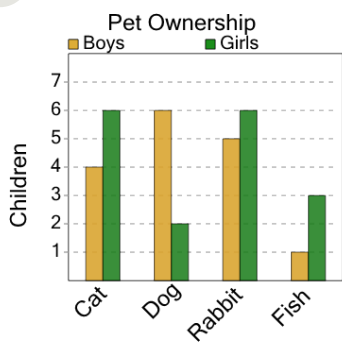
a

Boys

b

Girls

6



Do boys or girls have fewer fishs?

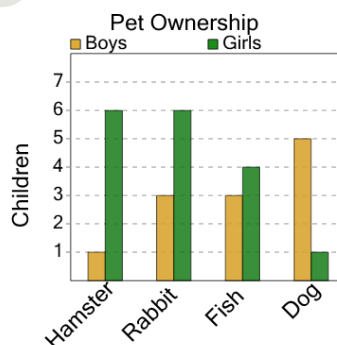
a

Girls

b

Boys

7



Do boys or girls have fewer hamsters?

a

Girls

b

Boys