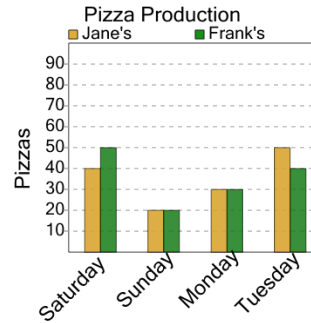




Math worksheet on 'Graphing - Bar Graph (Double) - Read Value (Level 3)'. Part of a broader unit on 'Data and Graphs - Practice'

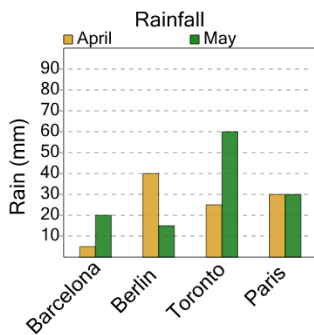
Learn online: app.mobius.academy/math/units/data_graphing_practice/

1 How many pizzas were made at Frank's on Monday?



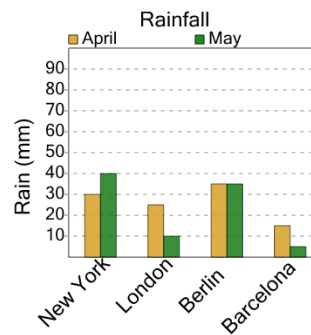
a	b	c
70	20	10
d	e	f
30	100	90

2 How many millimeters of rain were there in May in Berlin?



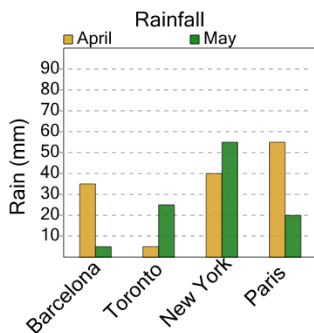
a	b	c
20	45	50
d	e	f
30	15	40

3 How many millimeters of rain were there in May in New York?



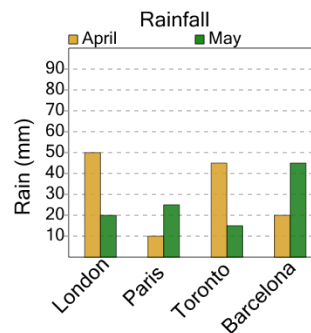
a	b	c
5	60	15
d	e	f
65	55	40

4 How many millimeters of rain were there in May in Paris?



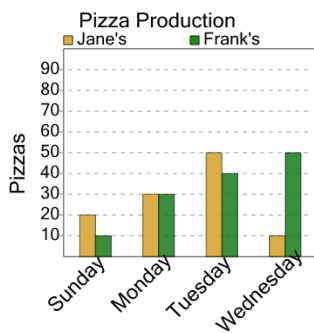
a	b	c
20	30	25
d	e	f
5	40	10

5 How many millimeters of rain were there in May in Toronto?



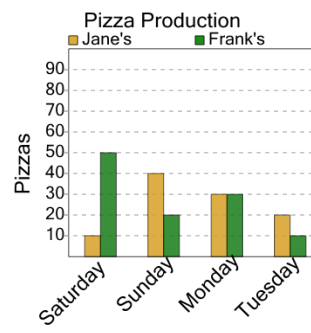
a	b	c
10	40	20
d	e	f
15	25	30

6 How many pizzas were made at Frank's on Sunday?



a	b	c
40	10	50
d	e	f
20	80	0

7 How many pizzas were made at Jane's on Tuesday?



a	b	c
90	20	50
d		
80		