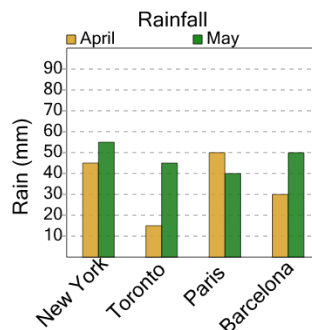




Math worksheet on 'Graphing - Bar Graph (Double) - Sum of Two (Level 3)'. Part of a broader unit on 'Data and Graphs - Advanced'

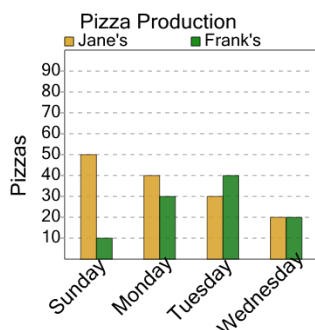
Learn online: app.mobius.academy/math/units/data_graphing_advanced/

1 How many millimeters of rain were there during April in Paris and Toronto total?



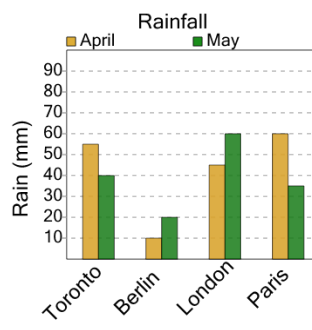
a	b	c
85	100	65
d	e	f
45	90	80

2 How many pizzas were made at Frank's on Sunday and Tuesday combined?



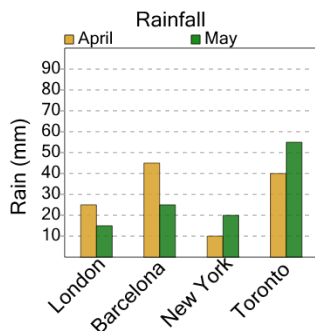
a	b	c
80	10	70
d	e	f
50	0	120

3 How many millimeters of rain were there during May in London and Berlin total?



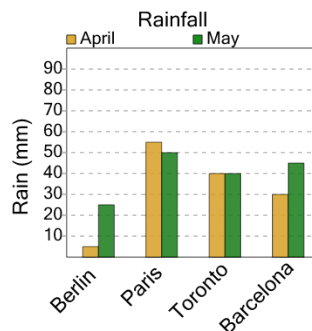
a	b	c
40	60	95
d	e	f
105	80	100

4 How many millimeters of rain were there during April in Barcelona and New York total?



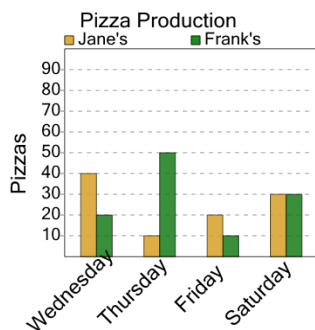
a	b	c
75	85	55
d	e	f
45	15	35

5 How many millimeters of rain were there during May in Barcelona and Berlin total?



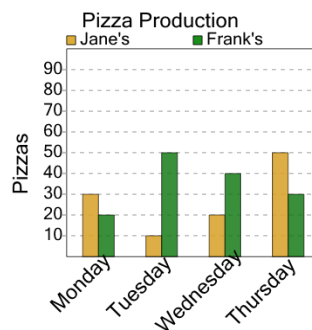
a	b	c
70	90	50
d	e	
55	85	

6 How many pizzas were made at Frank's on Friday and Wednesday combined?



a	b	c
60	50	90
d	e	f
30	100	10

7 How many pizzas were made at Frank's on Wednesday and Monday combined?



a	b	c
30	110	20
d	e	
60	10	