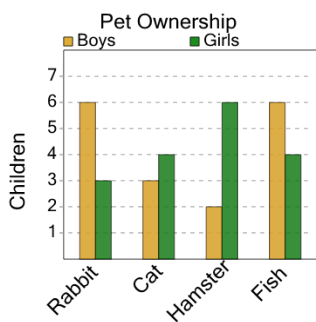




Math worksheet on 'Graphing - Bar Graph (Double) - Which Two are Same (Level 1)'. Part of a broader unit on 'Data and Graphs - Advanced'

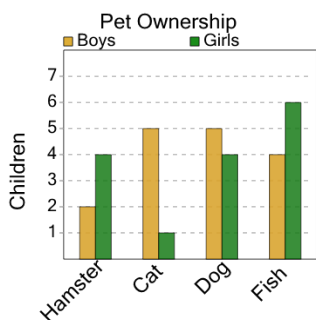
Learn online: app.mobius.academy/math/units/data_graphing_advanced/

2 What two pets are owned by the same number of boys?



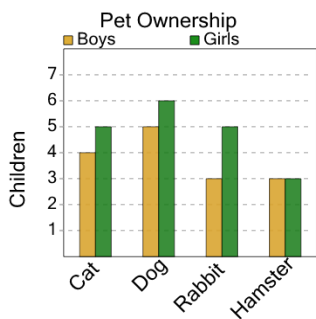
- a** Hamster and Rabbit
- b** Hamster and Cat
- c** Rabbit and Fish
- d** Fish and Cat

4 What two pets are owned by the same number of boys?



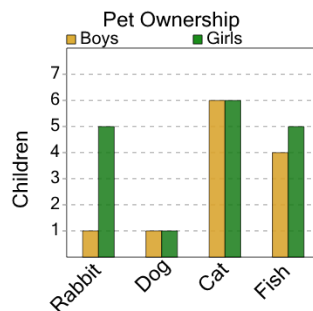
- a** Cat and Dog
- b** Fish and Hamster
- c** Hamster and Fish

6 What two pets are owned by the same number of girls?



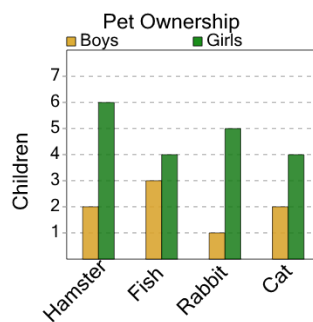
- a** Dog and Cat
- b** Cat and Rabbit
- c** Cat and Hamster
- d** Rabbit and Dog
- e** Hamster and Cat
- f** Hamster and Rabbit

1 What two pets are owned by the same number of girls?



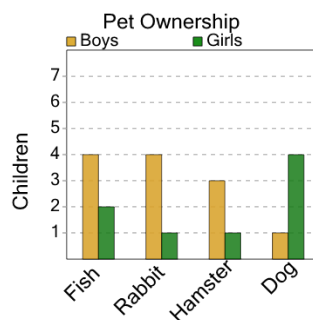
- a** Rabbit and Fish
- b** Rabbit and Cat
- c** Cat and Fish
- d** Dog and Fish
- e** Cat and Dog
- f** Dog and Cat

3 What two pets are owned by the same number of girls?



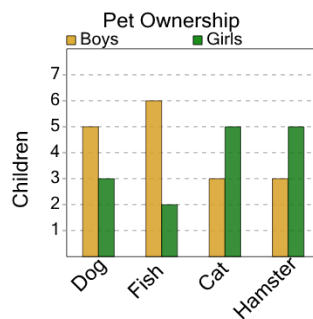
- a** Cat and Hamster
- b** Cat and Rabbit
- c** Fish and Cat
- d** Rabbit and Cat
- e** Rabbit and Fish
- f** Fish and Rabbit

5 What two pets are owned by the same number of boys?



- a** Dog and Rabbit
- b** Fish and Hamster
- c** Fish and Rabbit
- d** Dog and Fish

7 What two pets are owned by the same number of boys?



- a** Dog and Fish
- b** Fish and Cat
- c** Fish and Hamster
- d** Cat and Hamster
- e** Dog and Hamster