

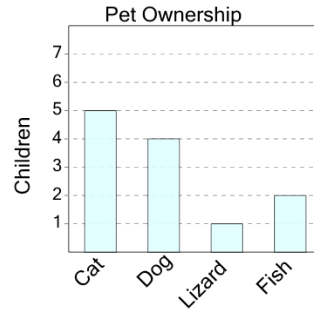


Math worksheet on 'Graphing - Bar Graph (Single) - Minimum (Level 1)'. Part of a broader unit on 'Data and Graphs - Intro'

Learn online: app.mobius.academy/math/units/data_graphing_intro/

1

What pet do the smallest number of children have?



a

Fish

b

Lizard

c

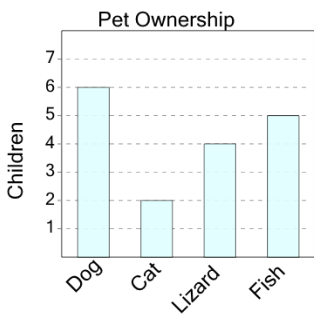
Cat

d

Dog

2

What pet do the smallest number of children have?



a

Cat

b

Lizard

c

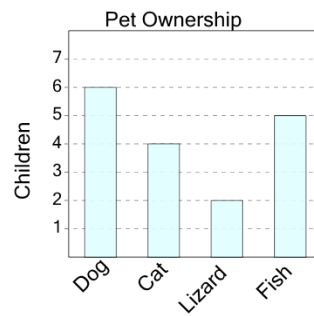
Fish

d

Dog

3

What pet do the smallest number of children have?



a

Dog

b

Lizard

c

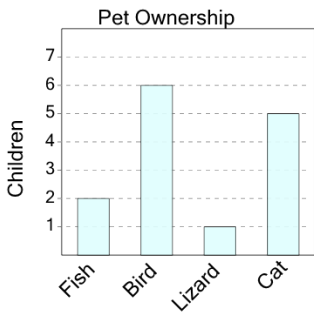
Fish

d

Cat

4

What pet do the smallest number of children have?



a

Lizard

b

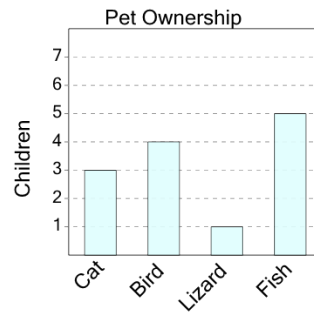
Fish

c

Cat

5

What pet do the smallest number of children have?



a

Cat

b

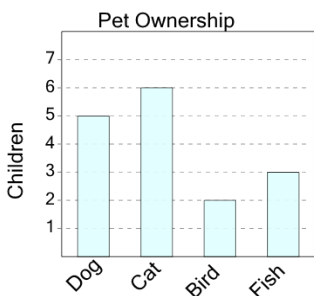
Fish

c

Lizard

6

What pet do the smallest number of children have?



a

Fish

b

Cat

c

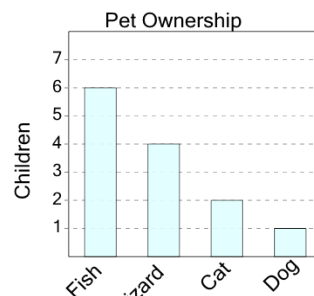
Bird

d

Dog

7

What pet do the smallest number of children have?



a

Cat

b

Fish

c

Dog

d

Lizard