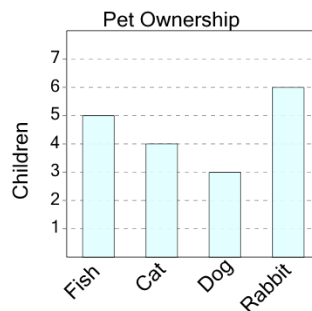




Math worksheet on 'Graphing - Bar Graph (Single) - Read Category (Level 1)'. Part of a broader unit on 'Data and Graphs - Intro'

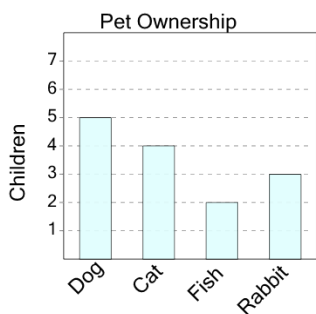
Learn online: app.mobius.academy/math/units/data_graphing_intro/

1 What pet do 4 children have?



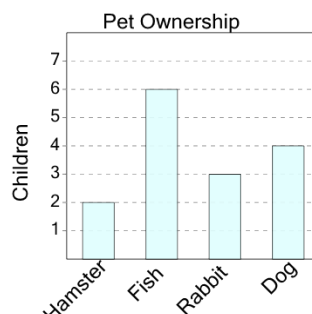
a	Rabbit	b	Cat
c	Fish	d	Dog

2 What pet do 3 children have?



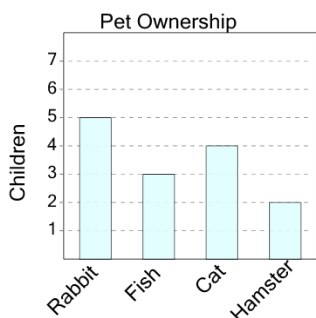
a	Cat	b	Rabbit
c	Dog	d	Fish

3 What pet do 3 children have?



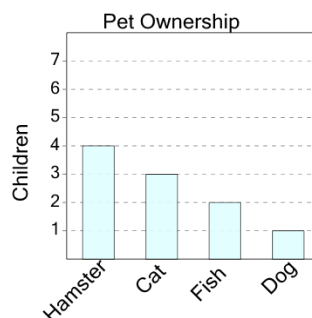
a	Rabbit	b	Hamster
c	Fish	d	Dog

4 What pet do 2 children have?



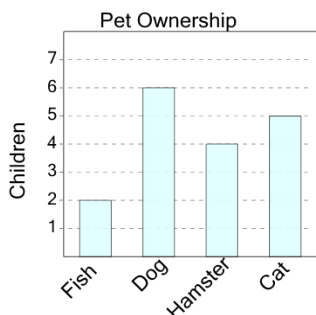
a	Cat	b	Hamster
c	Fish	d	Rabbit

5 What pet do 1 children have?



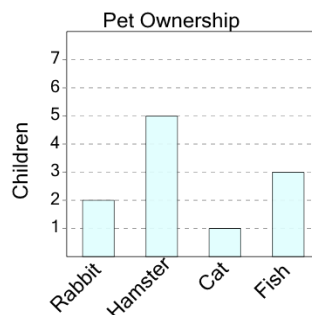
a	Cat	b	Fish
c	Hamster	d	Dog

6 What pet do 5 children have?



a	Cat	b	Dog
c	Hamster		

7 What pet do 2 children have?



a	Hamster	b	Cat
c	Rabbit	d	Fish