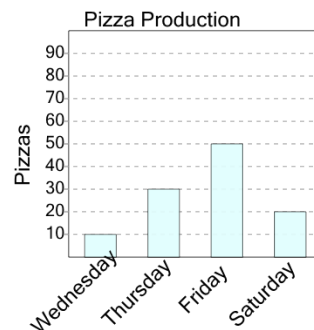




Math worksheet on 'Graphing - Bar Graph (Single) - Read Category (Level 3)'. Part of a broader unit on 'Data and Graphs - Intro'

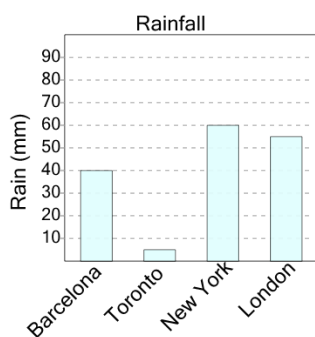
Learn online: [app.mobius.academy/math/units/data\\_graphing\\_intro/](http://app.mobius.academy/math/units/data_graphing_intro/)

**1** On what day were 20 pizzas made?



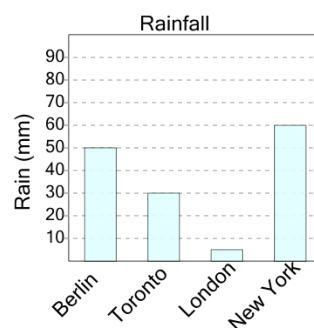
<b>a</b>	Friday	<b>b</b>	Saturday
<b>c</b>	Wednesday		

**2** What city had 5 millimeters of rain?



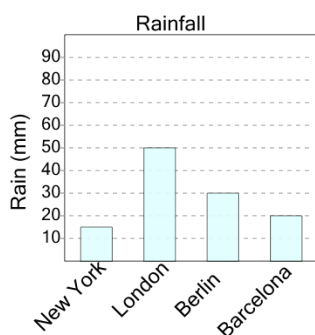
<b>a</b>	Barcelona	<b>b</b>	Toronto
<b>c</b>	New York		

**3** What city had 5 millimeters of rain?



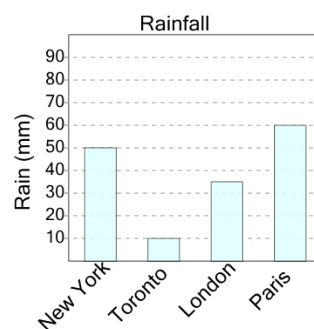
<b>a</b>	New York	<b>b</b>	London
<b>c</b>	Toronto	<b>d</b>	Berlin

**4** What city had 15 millimeters of rain?



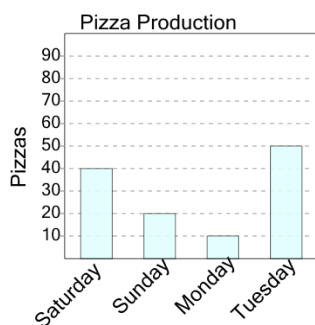
<b>a</b>	Berlin	<b>b</b>	New York
<b>c</b>	Barcelona		

**5** What city had 50 millimeters of rain?



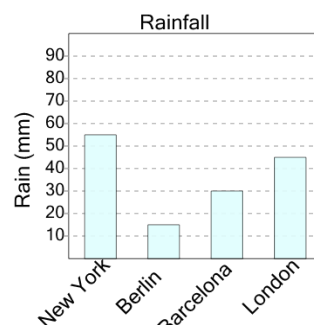
<b>a</b>	London	<b>b</b>	Paris
<b>c</b>	New York	<b>d</b>	Toronto

**6** On what day were 50 pizzas made?



<b>a</b>	Tuesday	<b>b</b>	Monday
<b>c</b>	Saturday	<b>d</b>	Sunday

**7** What city had 45 millimeters of rain?



<b>a</b>	Barcelona	<b>b</b>	New York
<b>c</b>	Berlin	<b>d</b>	London