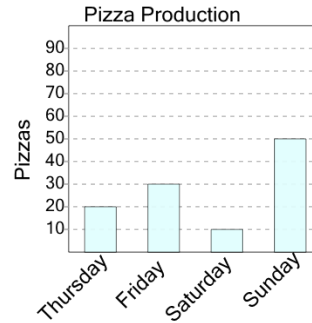




Math worksheet on 'Graphing - Bar Graph (Single) - Read Value (Level 3)'. Part of a broader unit on 'Data and Graphs - Intro'

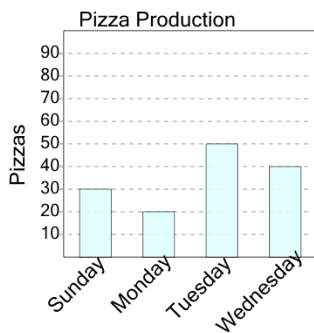
Learn online: app.mobius.academy/math/units/data_graphing_intro/

1 How many pizzas were made on Friday?



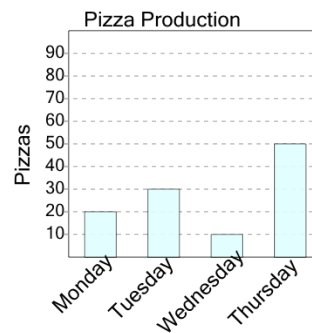
a	b	c
40	50	10
d		
30		

2 How many pizzas were made on Sunday?



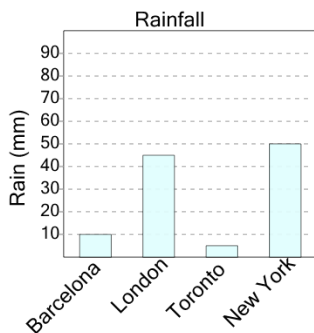
a	b	c
40	30	90
d	e	
50	20	

3 How many pizzas were made on Tuesday?



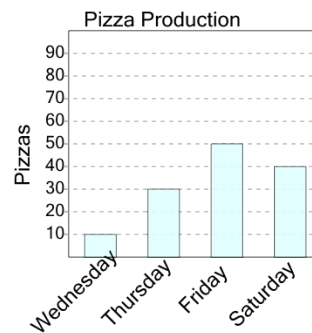
a	b	c
100	40	20
d	e	f
60	30	70

4 How many millimeters of rain were there in Toronto?



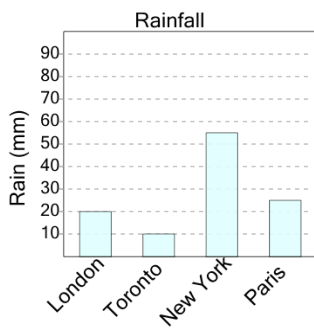
a	b	c
40	15	5
d		
25		

5 How many pizzas were made on Friday?



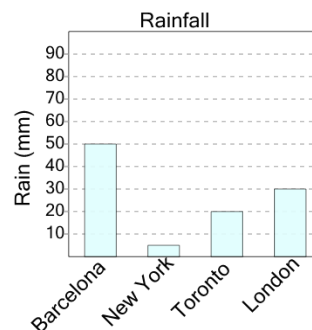
a	b	c
120	30	50
d	e	f
10	60	110

6 How many millimeters of rain were there in New York?



a	b	c
85	80	35
d	e	f
55	30	90

7 How many millimeters of rain were there in London?



a	b	c
55	30	25
d	e	f
40	10	45