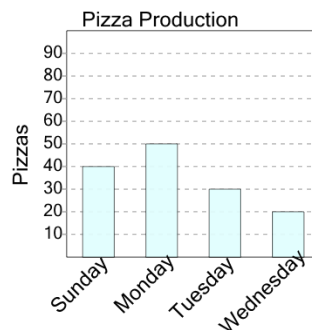




Math worksheet on 'Graphing - Bar Graph (Single) - Sum of Two (Level 3)'. Part of a broader unit on 'Data and Graphs - Practice'

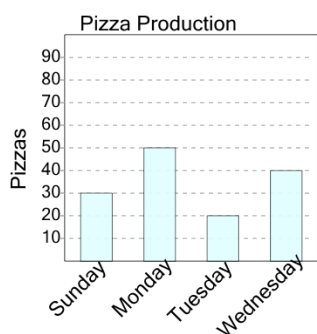
Learn online: app.mobius.academy/math/units/data_graphing_practice/

1 How many pizzas were made on Monday and Sunday combined?



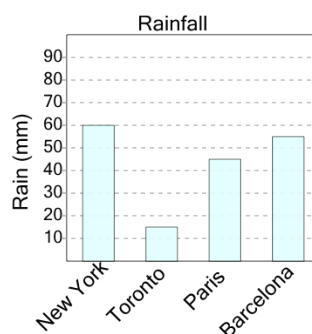
a	b	c
130	30	150
d	e	f
160	90	50

2 How many pizzas were made on Sunday and Tuesday combined?



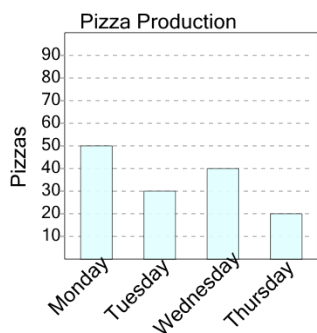
a	b	c
110	50	100
d		
80		

3 How many millimeters of rain were there in New York and Toronto total?



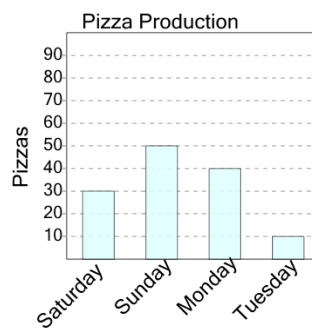
a	b	c
95	75	45
d	e	
35	65	

4 How many pizzas were made on Monday and Wednesday combined?



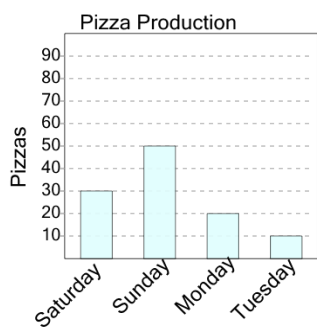
a	b	c
160	20	150
d	e	f
90	110	120

5 How many pizzas were made on Monday and Saturday combined?



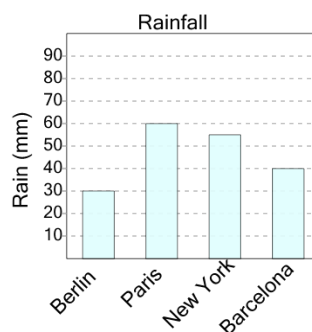
a	b	c
90	70	140
d	e	f
10	40	50

6 How many pizzas were made on Sunday and Monday combined?



a	b	c
10	70	0
d	e	f
130	20	90

7 How many millimeters of rain were there in New York and Berlin total?



a	b	c
85	60	110
d	e	f
115	55	50