




Math worksheet on 'Graphing - Bar Graph (Single) - Total of Series (Level 3)'. Part of a broader unit on 'Data and Graphs - Practice'

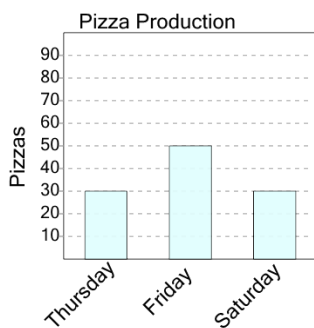
Learn online: app.mobius.academy/math/units/data_graphing_practice/

1 How many pizzas were made in total?



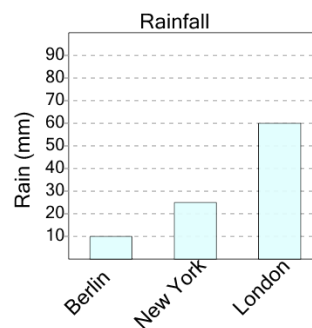
a	b	c
10	50	90
d	e	f
30	130	140

2 How many pizzas were made in total?



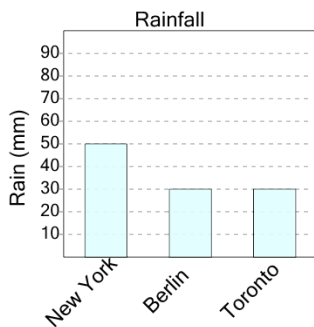
a	b	c
110	160	170
d	e	f
70	60	130

3 What was the total amount of rain measured?



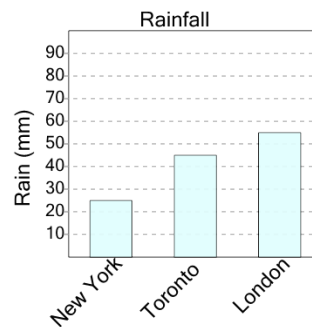
a	b	c
70	130	55
d	e	
95	80	

4 What was the total amount of rain measured?



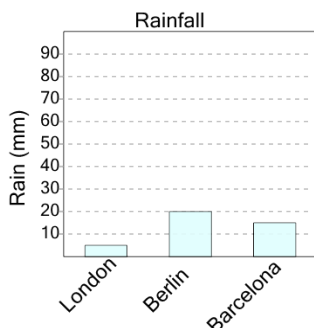
a	b	c
85	110	135
d	e	
80	70	

5 What was the total amount of rain measured?



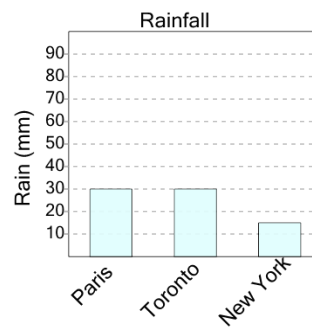
a	b	c
115	160	125
d		
140		

6 What was the total amount of rain measured?



a	b	c
0	40	30
d	e	f
70	25	50

7 What was the total amount of rain measured?



a	b	c
50	75	85
d	e	f
45	40	65