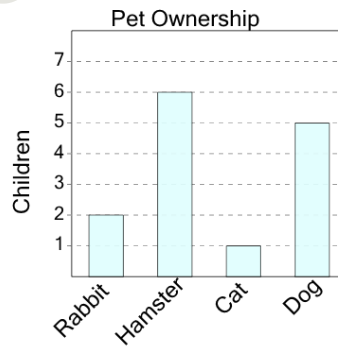




Math worksheet on 'Graphing - Bar Graph (Single) - Which is More (Level 1)'. Part of a broader unit on 'Data and Graphs - Intro'

Learn online: [app.mobius.academy/math/units/data\\_graphing\\_intro/](http://app.mobius.academy/math/units/data_graphing_intro/)

1



Do more kids have a hamster or a dog as a pet?

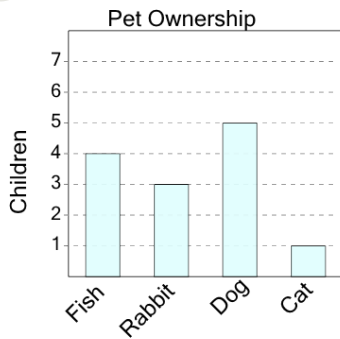
a

Hamster

b

Dog

2



Do more kids have a fish or a rabbit as a pet?

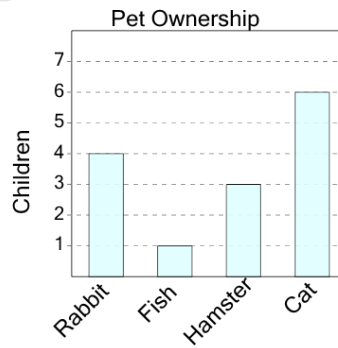
a

Fish

b

Rabbit

3



Do more kids have a cat or a fish as a pet?

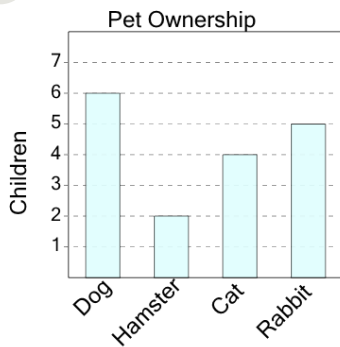
a

Fish

b

Cat

4



Do more kids have a hamster or a rabbit as a pet?

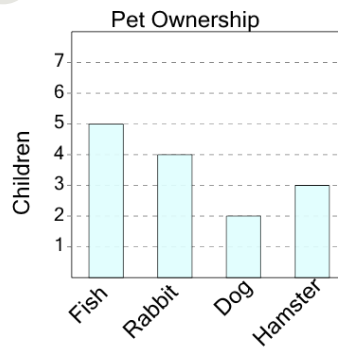
a

Rabbit

b

Hamster

5



Do more kids have a dog or a hamster as a pet?

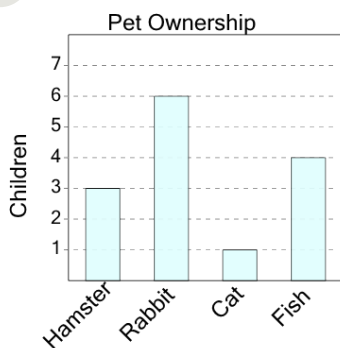
a

Dog

b

Hamster

6



Do more kids have a hamster or a cat as a pet?

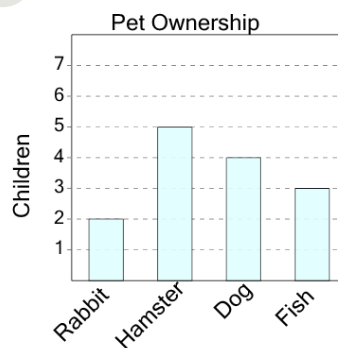
a

Cat

b

Hamster

7



Do more kids have a dog or a hamster as a pet?

a

Hamster

b

Dog