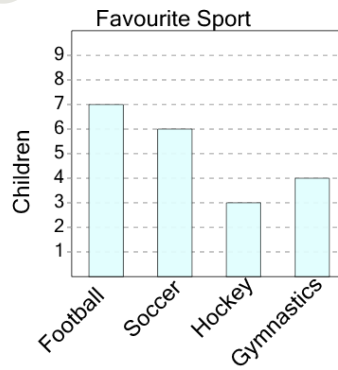




Math worksheet on 'Graphing - Bar Graph (Single) - Which is More (Level 2)'. Part of a broader unit on 'Data and Graphs - Intro'

Learn online: app.mobius.academy/math/units/data_graphing_intro/

1



Do more kids like gymnastics or football as a sport?

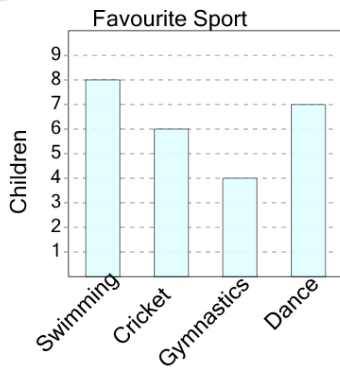
a

Football

b

Gymnastics

2



Do more kids like swimming or gymnastics as a sport?

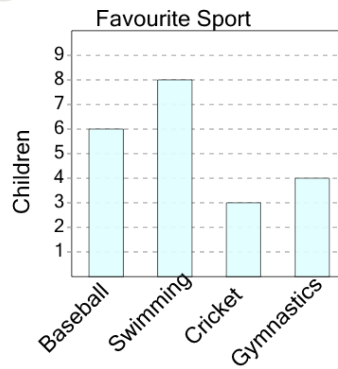
a

Swimming

b

Gymnastics

3



Do more kids like swimming or cricket as a sport?

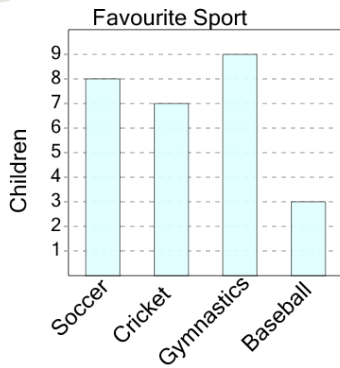
a

Cricket

b

Swimming

4



Do more kids like soccer or baseball as a sport?

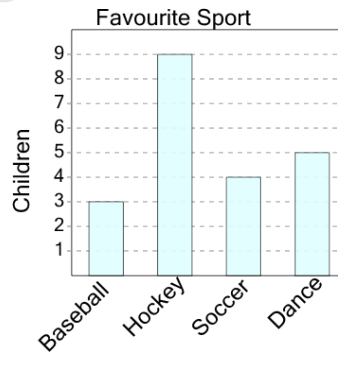
a

Baseball

b

Soccer

5



Do more kids like dance or soccer as a sport?

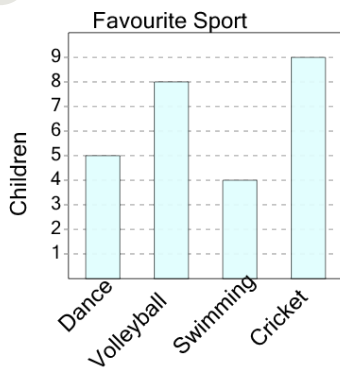
a

Dance

b

Soccer

6



Do more kids like swimming or dance as a sport?

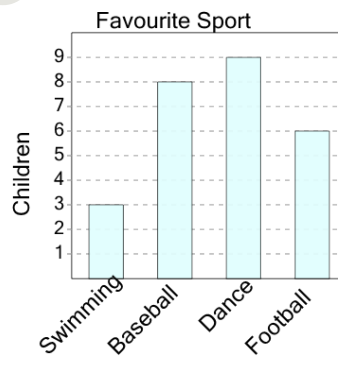
a

Swimming

b

Dance

7



Do more kids like football or swimming as a sport?

a

Football

b

Swimming