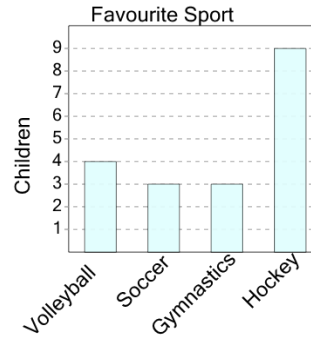




Math worksheet on 'Graphing - Bar Graph (Single) - Which Two are Same (Level 2)'. Part of a broader unit on 'Data and Graphs - Practice'

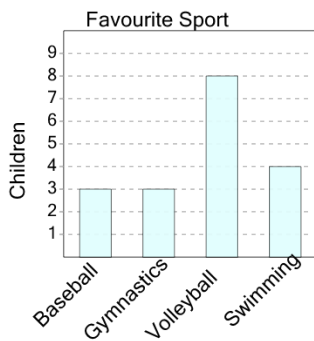
Learn online: app.mobius.academy/math/units/data_graphing_practice/

1 Which two sports are liked by the same number of kids?



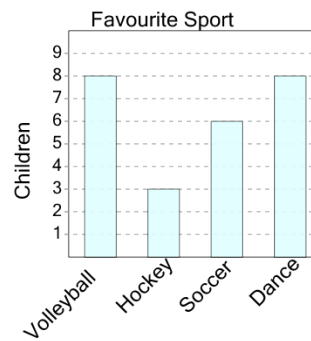
- a** Soccer and Volleyball
- b** Volleyball and Soccer
- c** Gymnastics and Hockey
- d** Volleyball and Gymnastics
- e** Soccer and Gymnastics
- f** Volleyball and Hockey

2 Which two sports are liked by the same number of kids?



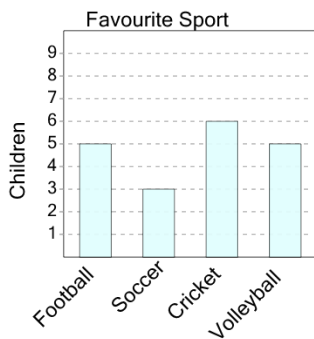
- a** Swimming and Gymnastics
- b** Baseball and Gymnastics
- c** Gymnastics and Swimming
- d** Swimming and Volleyball
- e** Volleyball and Gymnastics

3 Which two sports are liked by the same number of kids?



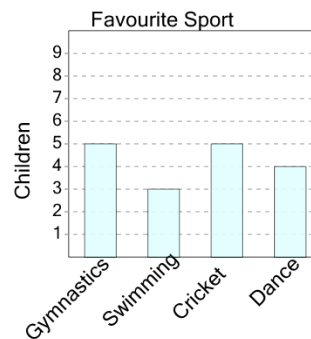
- a** Volleyball and Dance
- b** Dance and Hockey
- c** Hockey and Soccer
- d** Volleyball and Soccer
- e** Hockey and Dance

4 Which two sports are liked by the same number of kids?



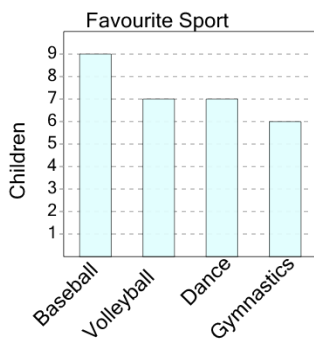
- a** Football and Cricket
- b** Cricket and Soccer
- c** Soccer and Volleyball
- d** Volleyball and Soccer
- e** Football and Volleyball

5 Which two sports are liked by the same number of kids?



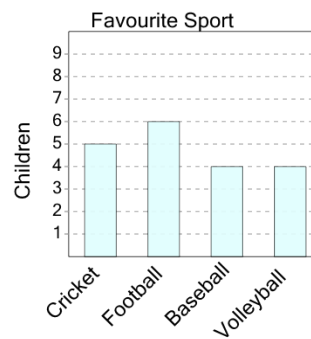
- a** Gymnastics and Swimming
- b** Swimming and Gymnastics
- c** Gymnastics and Cricket

6 Which two sports are liked by the same number of kids?



- a** Volleyball and Gymnastics
- b** Gymnastics and Volleyball
- c** Volleyball and Dance
- d** Baseball and Volleyball

7 Which two sports are liked by the same number of kids?



- a** Cricket and Football
- b** Baseball and Volleyball
- c** Baseball and Cricket
- d** Cricket and Baseball
- e** Football and Cricket
- f** Football and Volleyball