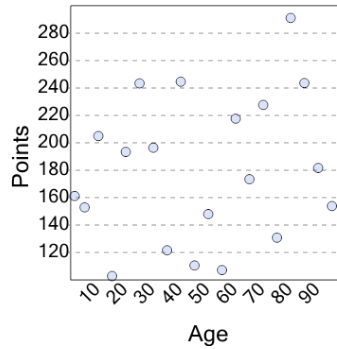




Math worksheet on 'Graphing - Scatter Plot (Linear) - Graph to Response Variable (Level 1)'. Part of a broader unit on 'Data and Graphs (Scatter Plots) - Intro'

Learn online: [app.mobius.academy/math/units/data\\_graphing\\_scatter\\_plots\\_intro/](http://app.mobius.academy/math/units/data_graphing_scatter_plots_intro/)

1



What is the response variable on this scatter plot?

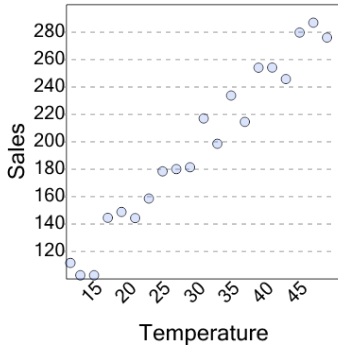
a

Points

b

Age

2



What is the response variable on this scatter plot?

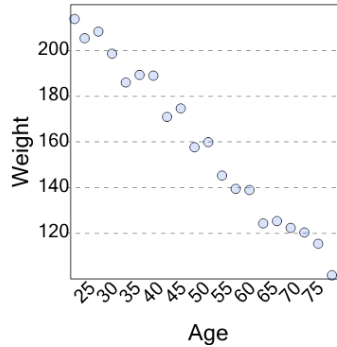
a

Temperature

b

Sales

3



What is the response variable on this scatter plot?

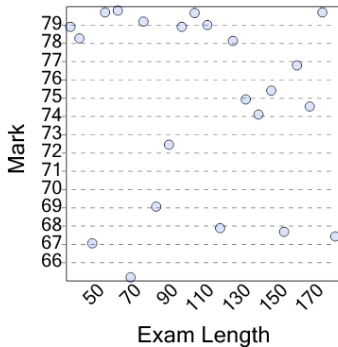
a

Weight

b

Age

4



What is the response variable on this scatter plot?

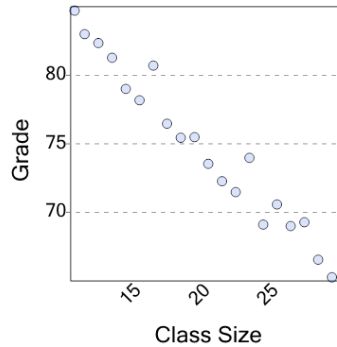
a

Mark

b

Exam Length

5



What is the response variable on this scatter plot?

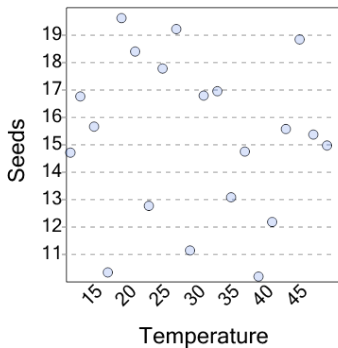
a

Class Size

b

Grade

6



What is the response variable on this scatter plot?

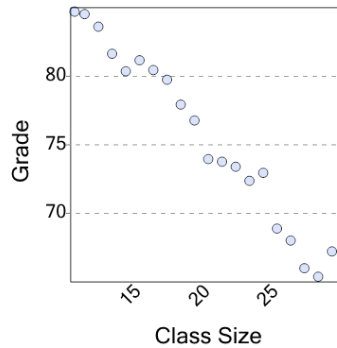
a

Temperature

b

Seeds

7



What is the response variable on this scatter plot?

a

Class Size

b

Grade