




Math worksheet on 'Decimal Concept Comparison - Picture Hundredths vs Decimal Number Hundredths (Level 1)'. Part of a broader unit on 'Decimal Foundations - Advanced'


Learn online: [app.mobius.academy/math/units/decimals\\_foundations\\_advanced/](http://app.mobius.academy/math/units/decimals_foundations_advanced/)

1 Choose the correct equality operator

0.16 ○ 


a <	b =	c >
--------	--------	--------

2 Choose the correct equality operator

 ○ 0.49


a <	b =	c >
--------	--------	--------

3 Choose the correct equality operator

 ○ 0.82


a <	b =	c >
--------	--------	--------

4 Choose the correct equality operator

0.3 ○ 


a <	b =	c >
--------	--------	--------

5 Choose the correct equality operator

 ○ 0.28


a <	b =	c >
--------	--------	--------

6 Choose the correct equality operator

 ○ 0.1

a <	b =	c >
--------	--------	--------

7 Choose the correct equality operator

 ○ 0.21

a <	b =	c >
--------	--------	--------