

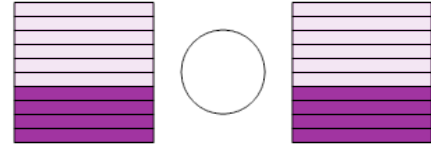


Math worksheet on 'Decimal Concept Comparison - Picture Tenths vs Picture Tenths (Level 1)'. Part of a broader unit on 'Decimal Foundations - Intro'

Learn online: app.mobius.academy/math/units/decimals_foundations_intro/

1

Choose the correct equality operator



a

<

b

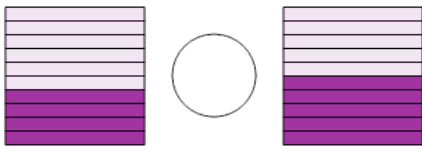
=

c

>

2

Choose the correct equality operator



a

<

b

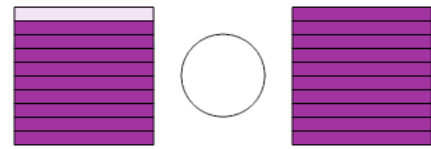
=

c

>

3

Choose the correct equality operator



a

<

b

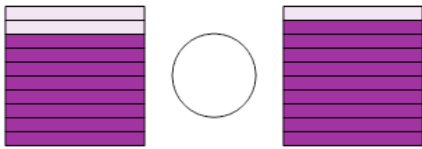
=

c

>

4

Choose the correct equality operator



a

<

b

=

c

>

5

Choose the correct equality operator



a

<

b

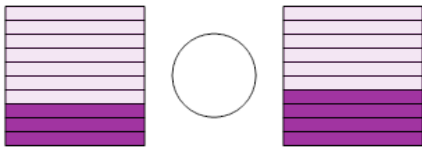
=

c

>

6

Choose the correct equality operator



a

<

b

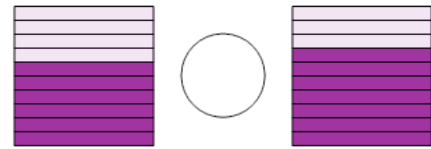
=

c

>

7

Choose the correct equality operator



a

<

b

=

c

>