




Math worksheet on 'Decimal Concept Image - Picture to Decimal - Tenths (Level 1)'. Part of a broader unit on 'Decimal Foundations - Advanced'


Learn online: [app.mobius.academy/math/units/decimals\\_foundations\\_advanced/](http://app.mobius.academy/math/units/decimals_foundations_advanced/)

**1** What decimal number does this picture show?




<b>a</b>	<b>b</b>	<b>c</b>
0.1	0.9	0.4
<b>d</b>		
0.5		

**2** What decimal number does this picture show?




<b>a</b>	<b>b</b>	<b>c</b>
0.1	0.9	0.2
<b>d</b>		
0.6		

**3** What decimal number does this picture show?




<b>a</b>	<b>b</b>	<b>c</b>
0.6	0.3	0.9
<b>d</b>		
0.5		

**4** What decimal number does this picture show?




<b>a</b>	<b>b</b>	<b>c</b>
0.2	0.8	0.9
<b>d</b>		
0.5		

**5** What decimal number does this picture show?




<b>a</b>	<b>b</b>	<b>c</b>
0.9	0.4	0.8
<b>d</b>		
0.1		

**6** What decimal number does this picture show?



<b>a</b>	<b>b</b>	<b>c</b>
0.6	0.5	0.7
<b>d</b>		
0.2		

**7** What decimal number does this picture show?



<b>a</b>	<b>b</b>	<b>c</b>
0.9	0.7	0.6
<b>d</b>		
0.3		