



Math worksheet on 'Fact Family - Multiplication - Fact to Triangle (Level 1)'. Part of a broader unit on 'Multiplication From Counting - Intro'


Learn online: app.mobius.academy/math/units/multiplication_from_counting_intro/

1

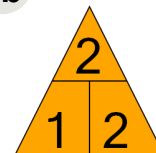
What fact family triangle would give this multiplication fact?

$$1 \times 2 = 2$$

a



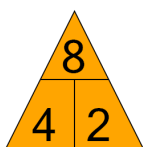
b



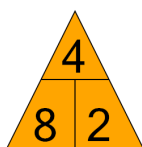
2 What fact family triangle would give this multiplication fact?

$$2 \times 4 = 8$$

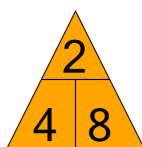
a



b



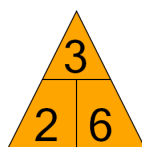
c



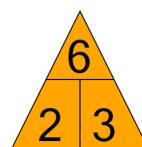
3 What fact family triangle would give this multiplication fact?

$$3 \times 2 = 6$$

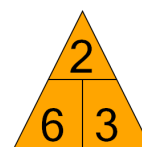
a



b



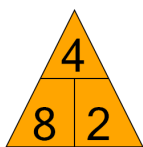
c



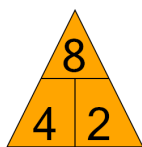
4 What fact family triangle would give this division fact?

$$8 \div 4 = 2$$

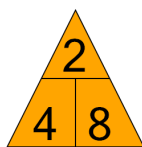
a



b



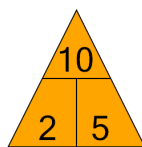
c



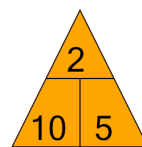
5 What fact family triangle would give this division fact?

$$10 \div 2 = 5$$

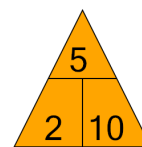
a



b



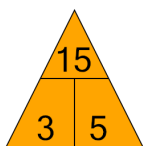
c



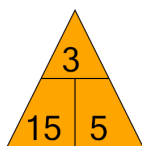
6 What fact family triangle would give this multiplication fact?

$$5 \times 3 = 15$$

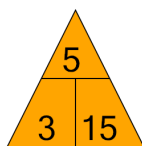
a



b



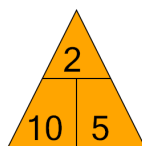
c



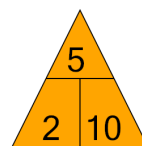
7 What fact family triangle would give this multiplication fact?

$$2 \times 5 = 10$$

a



b



c

